

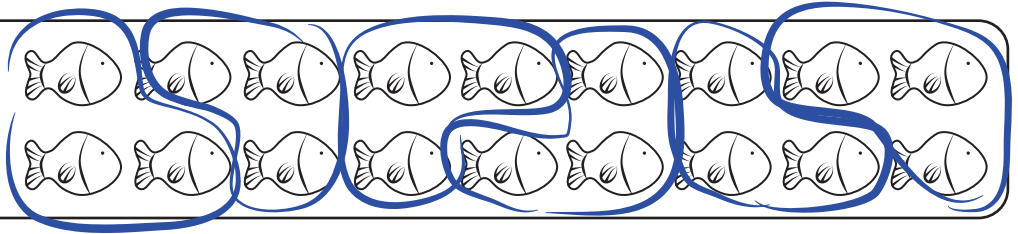
Name: _____

Division

Find the answer to each division fact by breaking each set of objects into equal groups.

example

$18 \div 3 = 6$



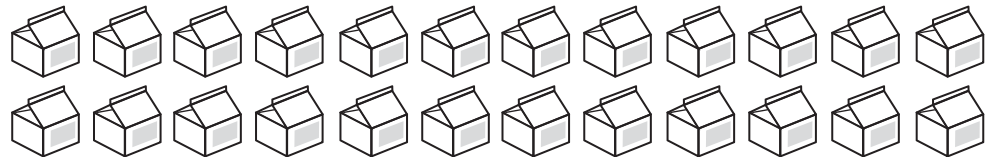
a. $20 \div 4 =$ _____




b. $16 \div 2 =$ _____



c. $24 \div 8 =$ _____



d. $25 \div 5 =$ _____



e. $27 \div 9 =$ _____



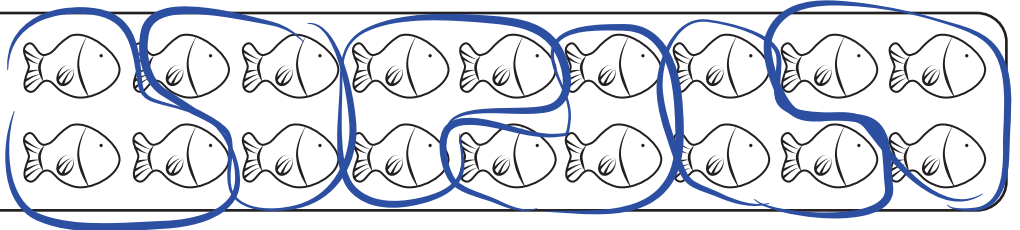
ANSWER KEY

Division


Find the answer to each division fact by breaking each set of objects into equal groups.

example

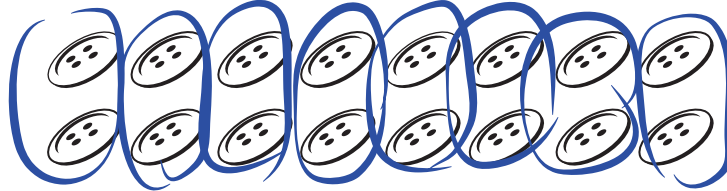
$$18 \div 3 = \underline{6}$$



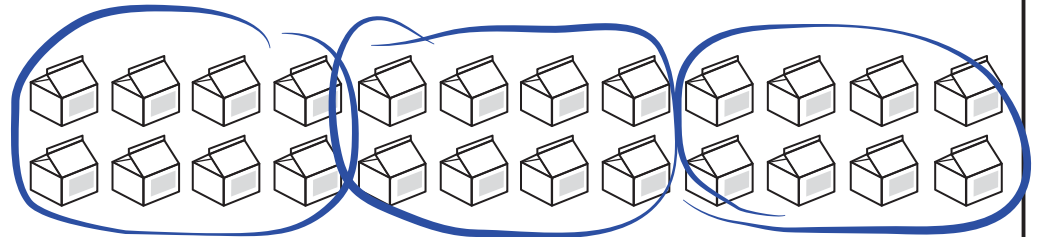
$$a. \quad 20 \div 4 = \underline{5}$$



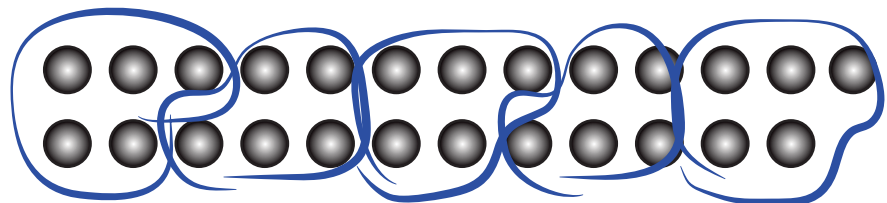
$$b. \quad 16 \div 2 = \underline{8}$$



$$c. \quad 24 \div 8 = \underline{3}$$



$$d. \quad 25 \div 5 = \underline{5}$$



$$e. \quad 27 \div 9 = \underline{3}$$

