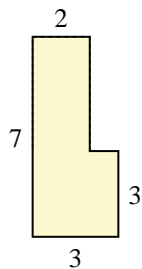




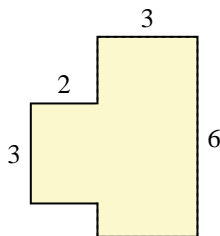
Find the total area of each shape. Measurement is in millimeters (mm). Not to scale.

Answers

1)



2)

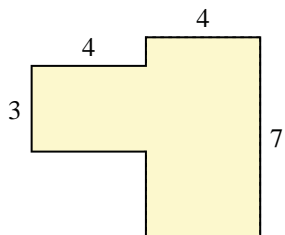


1. _____

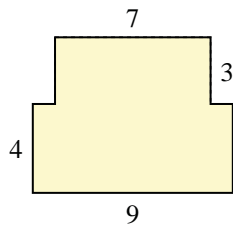
2. _____

3. _____

3)



4)

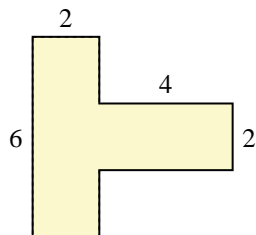


4. _____

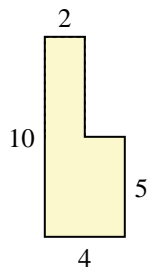
5. _____

6. _____

5)



6)



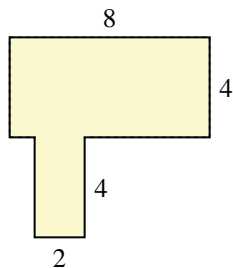
7. _____

8. _____

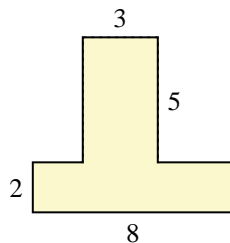
9. _____

10. _____

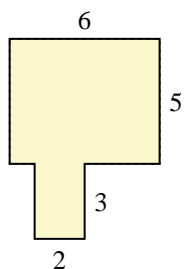
7)



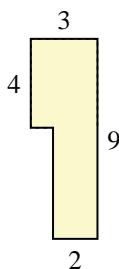
8)



9)

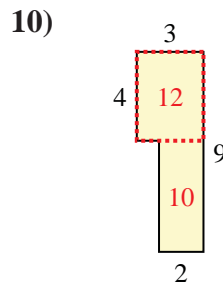
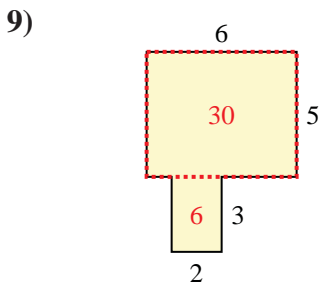
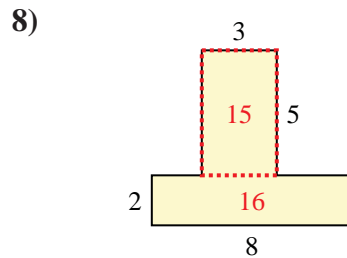
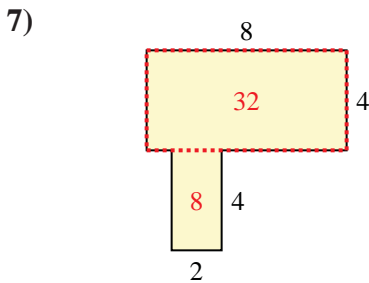
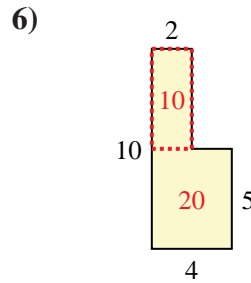
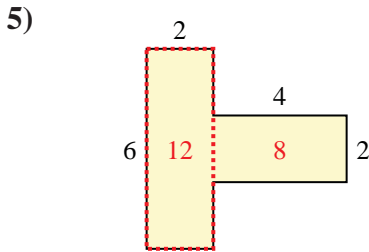
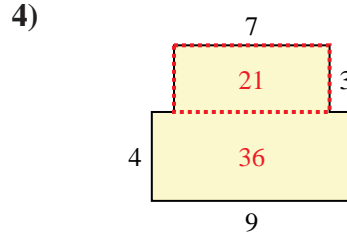
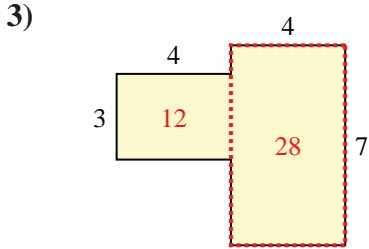
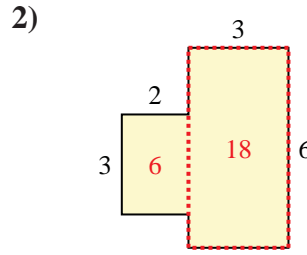
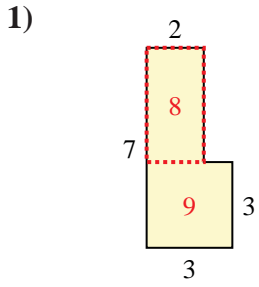


10)





Find the total area of each shape. Measurement is in millimeters (mm). Not to scale.



Answers

1. 17 mm²

2. 24 mm²

3. 40 mm²

4. 57 mm²

5. 20 mm²

6. 30 mm²

7. 40 mm²

8. 31 mm²

9. 36 mm²

10. 22 mm²