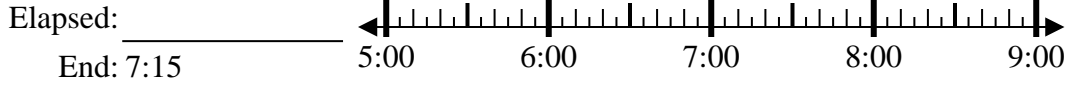




Solve each problem.

1) Start: 5:20



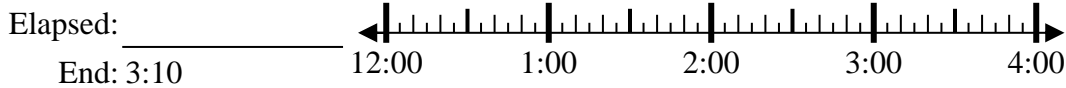
1. _____

2) Start: 2:30



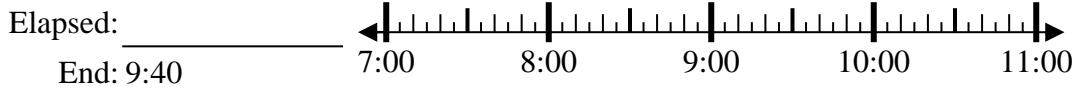
2. _____

3) Start: 12:55



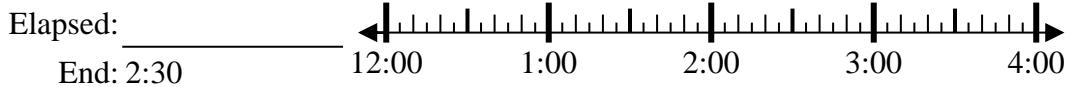
3. _____

4) Start: 7:20



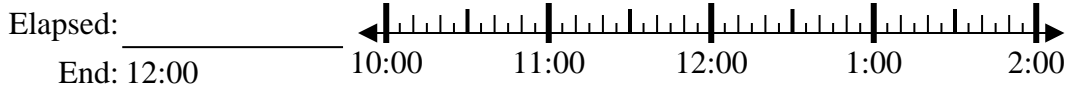
4. _____

5) Start: 12:00



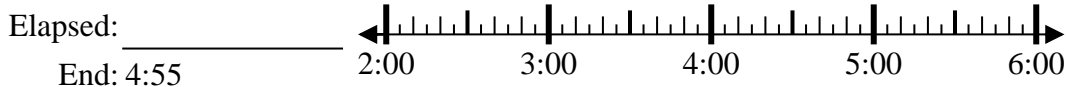
5. _____

6) Start: 10:35



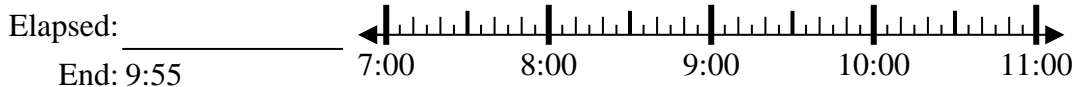
6. _____

7) Start: 2:15



7. _____

8) Start: 7:45



8. _____

Answers



Solve each problem.

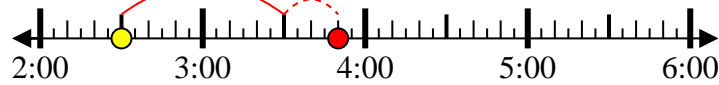
1) Start: 5:20

Elapsed: 1 hr & 55 mins
End: 7:15



2) Start: 2:30

Elapsed: 1 hr & 20 mins
End: 3:50



3) Start: 12:55

Elapsed: 2 hrs & 15 mins
End: 3:10



4) Start: 7:20

Elapsed: 2 hrs & 20 mins
End: 9:40



5) Start: 12:00

Elapsed: 2 hrs & 30 mins
End: 2:30



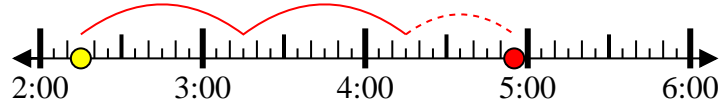
6) Start: 10:35

Elapsed: 1 hr & 25 mins
End: 12:00



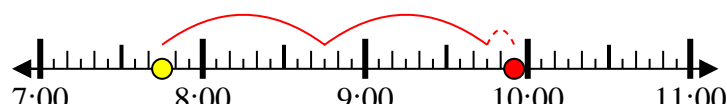
7) Start: 2:15

Elapsed: 2 hrs & 40 mins
End: 4:55



8) Start: 7:45

Elapsed: 2 hrs & 10 mins
End: 9:55



Answers

1. 1 hr & 55 mins

2. 1 hr & 20 mins

3. 2 hrs & 15 mins

4. 2 hrs & 20 mins

5. 2 hrs & 30 mins

6. 1 hr & 25 mins

7. 2 hrs & 40 mins

8. 2 hrs & 10 mins