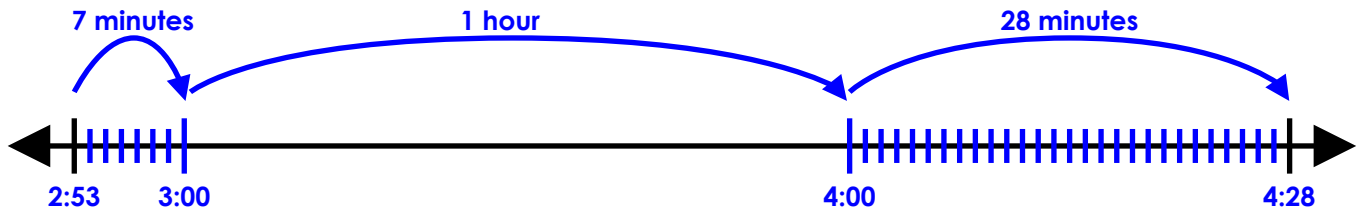


Name: _____

Elapsed Time Number Line

Start Time	End Time
2:53 pm	4:28 pm



elapsed time: 1 hour and 35 minutes

Use an elapsed time number line to calculate the amount of time that has passed.

a.

Start Time	End Time
5:41 am	7:26 am



elapsed time: _____

b.

Start Time	End Time
10:06 am	1:24 pm



elapsed time: _____

c.

Start Time	End Time
1:37 pm	3:48 pm



elapsed time: _____

d.

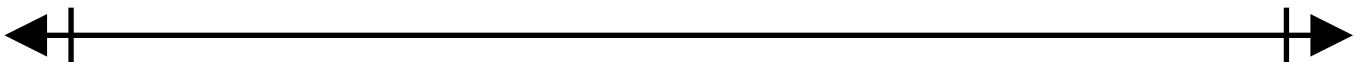
Start Time	End Time
8:18 am	11:07 am



elapsed time: _____

e.

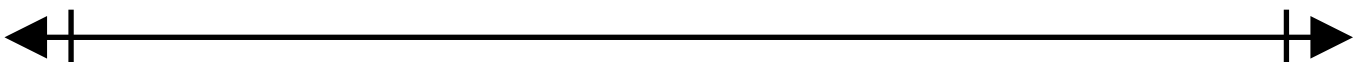
Start Time	End Time
12:50 pm	12:45 am



elapsed time: _____



Start Time	End Time
12 minutes after 7 pm	quarter after 11 pm

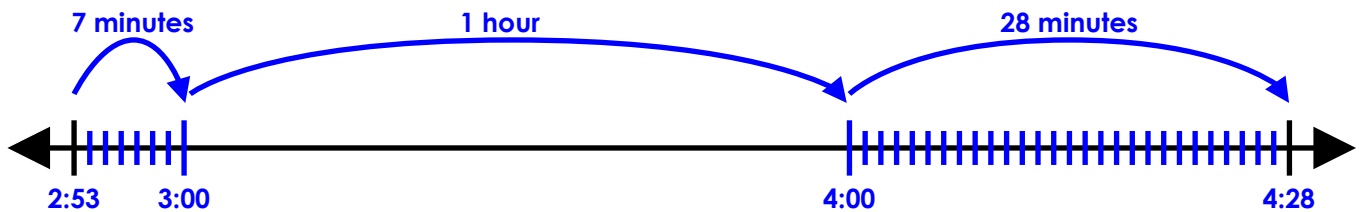


elapsed time: _____

ANSWER KEY

Elapsed Time Number Line

Start Time	End Time
2:53 pm	4:28 pm



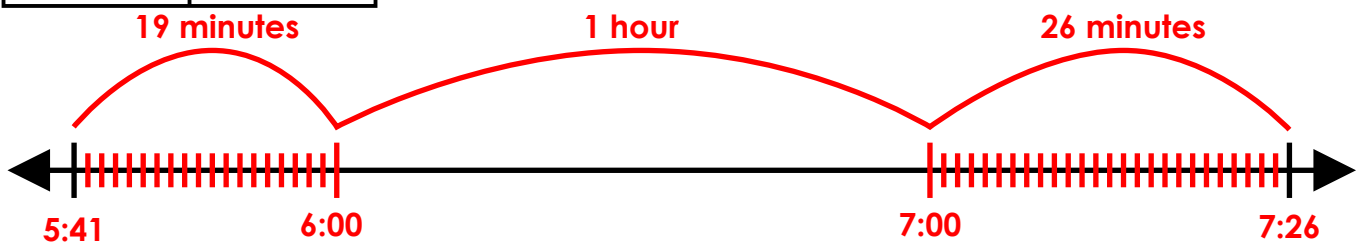
elapsed time: 1 hour and 35 minutes

Use an elapsed time number line to calculate the amount of time that has passed.

TIMELINE ANSWERS NOT DRAWN TO SCALE

a.

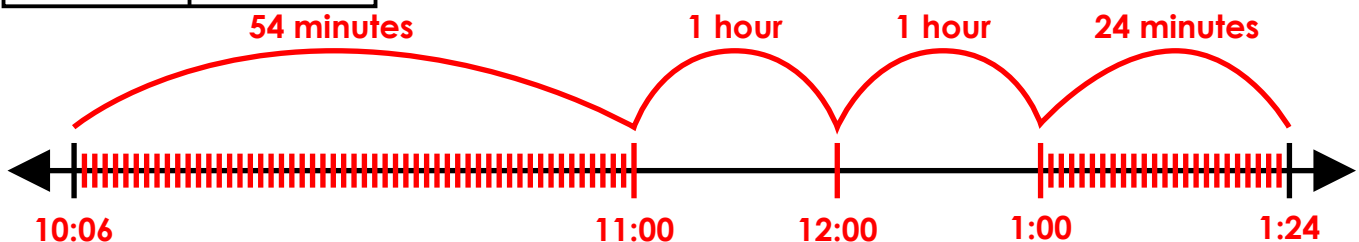
Start Time	End Time
5:41 am	7:26 am



elapsed time: 1 hour and 45 minutes

b.

Start Time	End Time
10:06 am	1:24 pm



elapsed time: 2 hours and 78 minutes = 3 hours and 18 minutes

