

Name

My Homework

Lesson 2




Model Addition

Homework Helper



Need help? connectED.mcgraw-hill.com

To find the whole, add the parts.

Part	Part
	
Whole	
	

Part	Part
3	4
Whole	
7	

Practice

Use pennies to add. Write the number.

1.

Part	Part
8	1
Whole	

2.

Part	Part
5	2
Whole	

3.

Part	Part
2	3
Whole	

4.

Part	Part
3	5
Whole	

Use pennies to add. Write the number.

5.

Part	Part
1	4
Whole	

6.

Part	Part
5	1
Whole	

7. Stacie caught 4 fish in the morning.
She caught 3 more fish in the afternoon.
How many fish did Stacie catch in all?

_____ fish

Vocabulary Check



Complete the sentence.

in all

part

8. You can add the numbers from each _____
to find the whole.



Math at Home Place 2 red paper circles and 4 yellow paper circles on a table.

Have your child count the circles. Ask your child to identify all of the different ways to make 6.