

Name

My Homework

Lesson 5

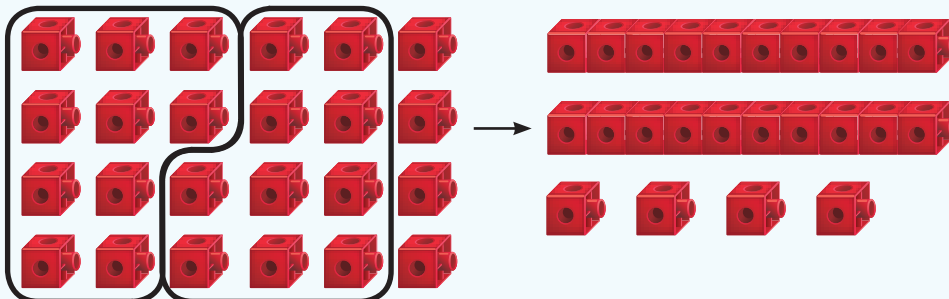
Tens and Ones

Homework Helper

eHelp



Need help? connectED.mcgraw-hill.com




Helpful Hint

Put together
10 ones to
make 1 ten.


$$24 \text{ ones} = 2 \text{ tens and } 4 \text{ ones} = 24$$

Practice

Circle groups of ten. Write how many tens and ones.
Write how many there are in all.



$$15 \text{ ones} = \underline{\quad} \text{ ten and } \underline{\quad} \text{ ones} = \underline{\quad}$$



$$32 \text{ ones} = \underline{\quad} \text{ tens and } \underline{\quad} \text{ ones} = \underline{\quad}$$

Make groups of tens and ones. Write how many.

3. 52 ones = _____ tens and _____ ones = _____

4. 77 ones = _____ tens and _____ ones = _____

5. 55 ones = _____ tens and _____ ones = _____

6. 80 ones = _____ tens and _____ ones = _____

7. 91 ones = _____ tens and _____ one = _____

8. Maria has 20 pencils in one box. She has 3 pencils in another box. How many pencils does Maria have in all?

_____ pencils

Get to the point!

Vocabulary Check



Write the missing word.

ones

regroup

9. You can _____ 10 ones as 1 ten.



Math at Home Ask your child to regroup 83 as tens and ones.