

Name

My Homework

Lesson 7


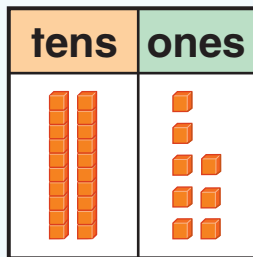
Numbers to 100

Homework Helper



Need help? connectED.mcgraw-hill.com

You can write numbers in different ways.


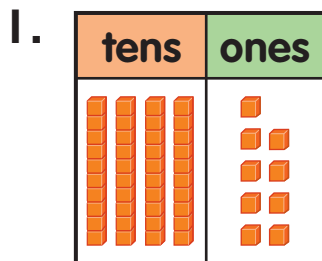


2 tens 8 ones

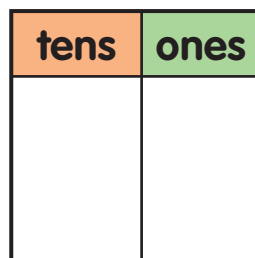
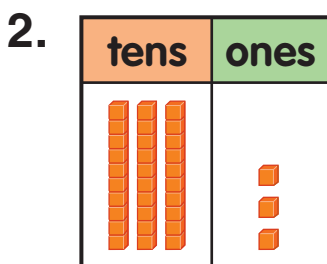
28
twenty-eight

Practice

Count groups of tens and ones. Write the tens and ones. Then write the number.



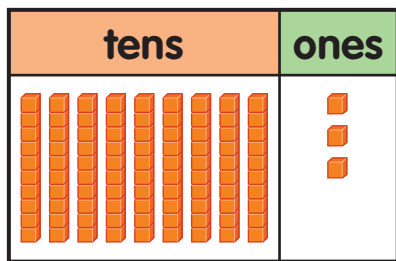
forty-nine



thirty-three


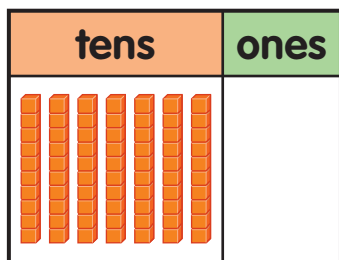
Count groups of tens and ones. Write the tens and ones. Then write the number.

3.



 ninety-three

4.



 seventy

5. What number do you have if you have 4 tens and 16 ones?

Test Practice


6. How many tens and ones are in 58?

5 tens 9 ones

4 tens 8 ones

4 tens 9 ones

5 tens 8 ones



Math at Home Ask your child to show 64 in two different ways.