

Name

My Homework

Lesson 8

Ten More, Ten Less

Homework Helper




Need help? connectED.mcgraw-hill.com

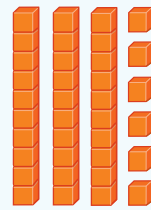
You can use mental math to find ten more or ten less than a number.



16



26



36

36 is **ten more** than 26.

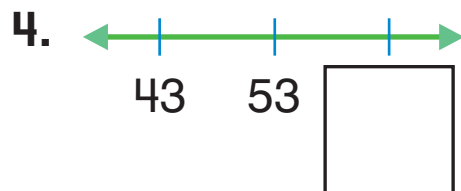
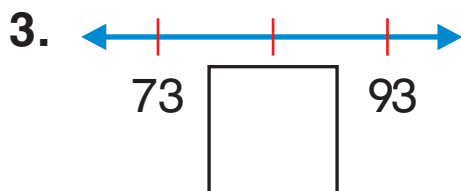
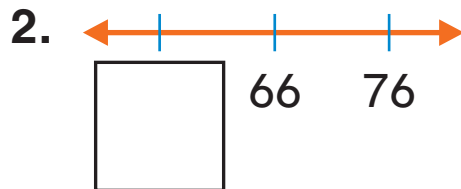
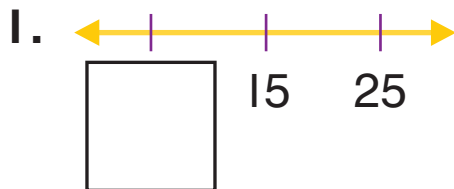
16 is **ten less** than 26.

Helpful Hint

Count by 10s.

16, 26, 36

Write the missing number.



Write the number that is ten more.

5. 12, _____

6. 20, _____

7. 77, _____

8. 9, _____

9. 26, _____

10. 55, _____

Write the number that is ten less.

11. _____, 57

12. _____, 31

13. _____, 82

14. _____, 98

15. _____, 20

16. _____, 71

17. Miguel has 25 dinosaurs. He has 10 more robots than dinosaurs. How many robots does Miguel have?

_____ robots

Test Practice

18. Rhonda has 24 books. She gets 10 more books. How many books does Rhonda have in all?

70

55

34

18



Math at Home Write a multiple of ten such as 10, 20, 30, 40, 50, etc. up to 80 on a piece of paper. Ask your child to write the number that is ten more or ten less than that number.