

Name _____

My Homework

Lesson 5


Vertical Subtraction

Homework Helper




Need help? connectED.mcgraw-hill.com

You can subtract across, or you can subtract down.



$$9 - 3 = 6$$

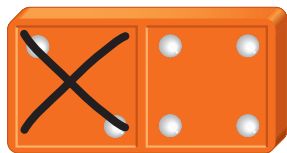


$$\begin{array}{r} 9 \\ - 3 \\ \hline 6 \end{array}$$

Practice


Subtract.

1.



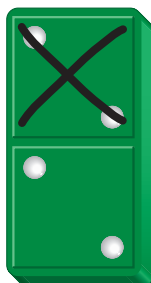
$$6 - 2 = \underline{\quad}$$

2.



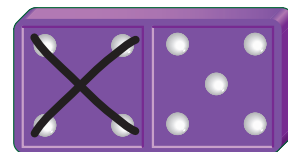
$$\begin{array}{r} 8 \\ - 2 \\ \hline \square \end{array}$$

3.



$$\begin{array}{r} 4 \\ - 2 \\ \hline \square \end{array}$$

4.



$$9 - 4 = \underline{\quad}$$

Subtract.

5. $3 - 1 = \underline{\quad}$

6. $9 - 6 = \underline{\quad}$

7.
$$\begin{array}{r} 7 \\ - 2 \\ \hline \square \end{array}$$

8.
$$\begin{array}{r} 8 \\ - 1 \\ \hline \square \end{array}$$


9.
$$\begin{array}{r} 2 \\ - 2 \\ \hline \square \end{array}$$

10. There are 7 mangos growing on a tree. Diego picks 3 of the mangos. How many mangos are still on the tree?

$$\begin{array}{r} \square \\ - \square \\ \hline \square \end{array} \text{ mangos}$$

Test Practice

11. Which number sentence is shown?



$5 - 3 = 2$

$8 - 3 = 5$

$3 - 3 = 0$

$3 + 5 = 8$



Math at Home Use 9 small objects. Show subtraction by taking some objects away. Have your child write the subtraction number sentence vertically and horizontally.