

Name

My Homework

Lesson 7

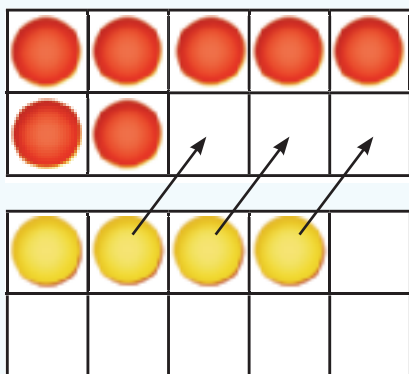
Make 10 to Add

Homework Helper



Need help? connectED.mcgraw-hill.com

You can make a 10 to add.



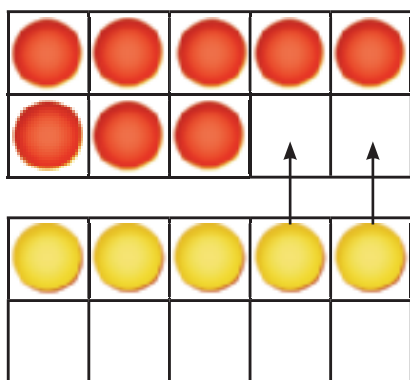
$$\begin{array}{r} 7 \\ + 4 \\ \hline 11 \end{array} \longrightarrow \begin{array}{r} 10 \\ + 1 \\ \hline 11 \end{array}$$

Helpful Hint

Move 3 counters up to make a 10.

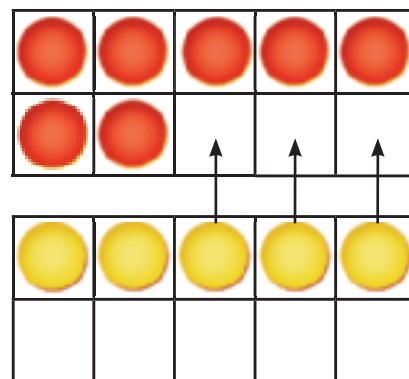
Make a ten to add.

1.



$$\begin{array}{r} 8 \\ + 5 \\ \hline \square \end{array} \longrightarrow \begin{array}{r} 10 \\ + \square \\ \hline \square \end{array}$$

2.



$$\begin{array}{r} 7 \\ + 5 \\ \hline \square \end{array} \longrightarrow \begin{array}{r} 10 \\ + \square \\ \hline \square \end{array}$$

Make a ten to add.

$$\begin{array}{r} 3. \quad 8 \\ + 9 \\ \hline \square \end{array} \rightarrow \begin{array}{r} \quad 10 \\ + \square \\ \hline \square \end{array}$$

$$\begin{array}{r} 4. \quad 9 \\ + 4 \\ \hline \square \end{array} \rightarrow \begin{array}{r} \quad 10 \\ + \square \\ \hline \square \end{array}$$

$$\begin{array}{r} 5. \quad 7 \\ + 8 \\ \hline \square \end{array} \rightarrow \begin{array}{r} \quad 10 \\ + \square \\ \hline \square \end{array}$$

$$\begin{array}{r} 6. \quad 8 \\ + 6 \\ \hline \square \end{array} \rightarrow \begin{array}{r} \quad 10 \\ + \square \\ \hline \square \end{array}$$

7. There are 7 **squirrels** in the park. 5 more **squirrels** come to the park. How many **squirrels** are in the park now?

$$\begin{array}{r} 7 \\ + 5 \\ \hline \square \end{array} \rightarrow \begin{array}{r} \quad 10 \\ + \square \\ \hline \square \end{array}$$

_____ **squirrels**



Test Practice

8. Find $9 + 7$.

14



15



16



17



Math at Home Draw two ten-frames. Give your child addition problems with sums to 20 and pennies. Help him or her solve the problems using the ten-frames and pennies.