

Name _____

My Homework

Lesson 2

Triangles and Trapezoids

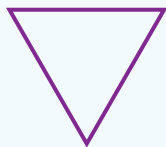
Homework Helper



Need help? connectED.mcgraw-hill.com

Triangles and trapezoids are closed two-dimensional shapes. They have vertices and straight sides.

triangle



3 sides
3 vertices

trapezoid

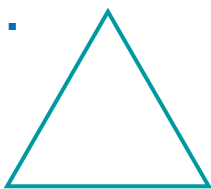


4 sides
4 vertices

Practice

Write how many sides and vertices.

1.




_____ sides
_____ vertices

2.



_____ sides
_____ vertices

3.



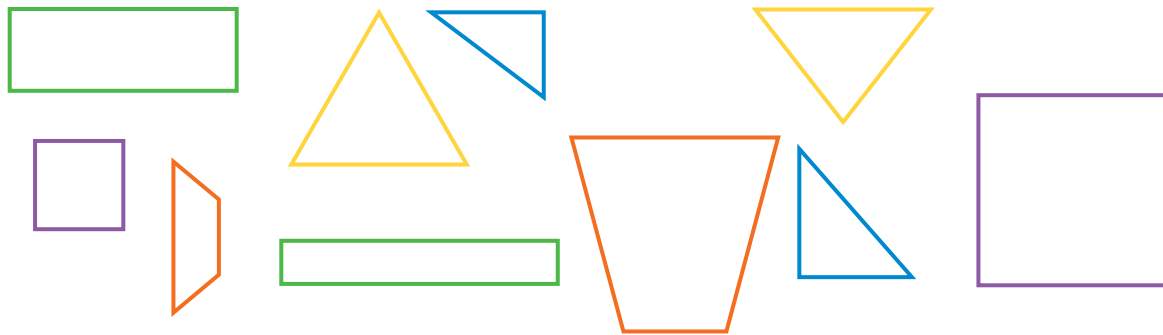
_____ sides
_____ vertices

4.



_____ sides
_____ vertices

5. Color all of the triangles red. Color all of the trapezoids purple. Then write how many.



_____ triangles

_____ trapezoids

Draw and write the name of the shape.

6. I am a two-dimensional shape that has less than 4 sides. All of my sides are straight. What shape am I?

Vocabulary Check



Draw lines to match.

7. **triangle**



8. **trapezoid**



Math at Home Have your child compare a triangle and a trapezoid using words such as sides and vertices.