

Name

My Homework

Lesson 6

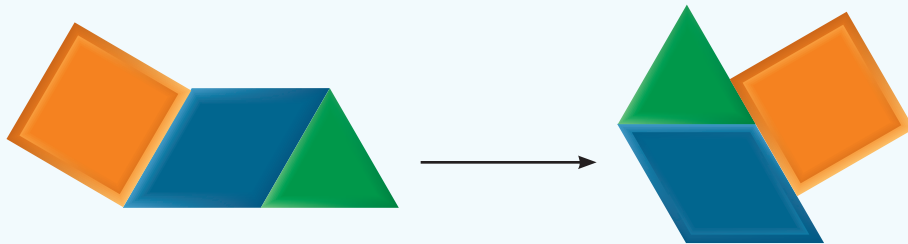
More Composite Shapes

Homework Helper




Need help? connectED.mcgraw-hill.com

You can move shapes around to make different shapes.




Which 3 shapes were used to make the shape above?



Practice

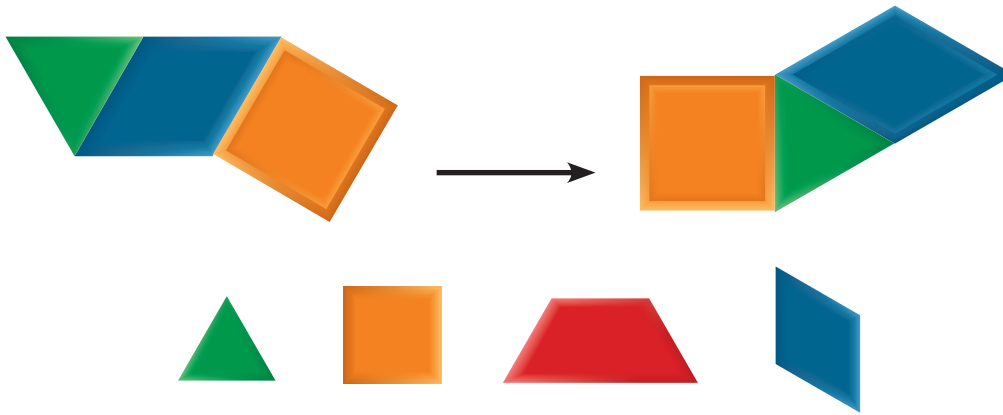
Circle the pattern blocks used to make the shape.

1.



Circle the pattern blocks used to make the shape.

2.




3. Everet pushes these 2 squares together. Write the name of the new shape that Everet makes.



Test Practice

4. Sarai joined two shapes together. She made the following shape. What 2 shapes did Sarai join together?



2 triangles



2 squares



2 circles



2 trapezoids



Math at Home Cut out some triangles, squares, and rectangles from construction paper. Have your child put the shapes together to create new shapes.