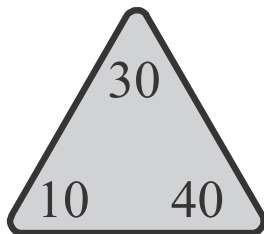


Lesson 8 Enrich

Relate Addition and Subtraction of Tens

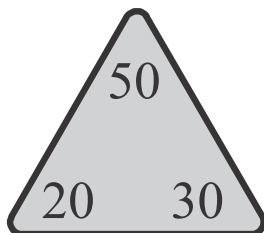
Use the numbers in the fact triangle to write related addition and subtraction number sentences.

1.



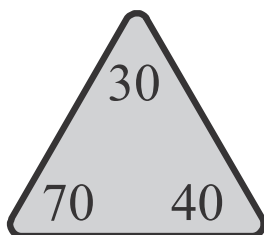
$$\begin{array}{r} \underline{\quad\quad} + \underline{\quad\quad} = \underline{\quad\quad} \\ \underline{\quad\quad} - \underline{\quad\quad} = \underline{\quad\quad} \\ \underline{\quad\quad} + \underline{\quad\quad} = \underline{\quad\quad} \\ \underline{\quad\quad} - \underline{\quad\quad} = \underline{\quad\quad} \end{array}$$

2.



$$\begin{array}{r} \underline{\quad\quad} + \underline{\quad\quad} = \underline{\quad\quad} \\ \underline{\quad\quad} - \underline{\quad\quad} = \underline{\quad\quad} \\ \underline{\quad\quad} + \underline{\quad\quad} = \underline{\quad\quad} \\ \underline{\quad\quad} - \underline{\quad\quad} = \underline{\quad\quad} \end{array}$$

3.



$$\begin{array}{r} \underline{\quad\quad} + \underline{\quad\quad} = \underline{\quad\quad} \\ \underline{\quad\quad} - \underline{\quad\quad} = \underline{\quad\quad} \\ \underline{\quad\quad} + \underline{\quad\quad} = \underline{\quad\quad} \\ \underline{\quad\quad} - \underline{\quad\quad} = \underline{\quad\quad} \end{array}$$