


# Check My Progress *(Lessons 1 through 4)*

**Write how many tens and ones. Write how many in all.**



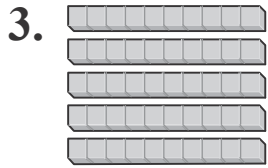
\_\_\_\_\_ ten and \_\_\_\_\_ ones = \_\_\_\_\_

2. Write the missing number.


109, 110, 111, \_\_\_\_\_, 113

---

**Count groups of ten. Write the number.**




\_\_\_\_\_ tens = \_\_\_\_\_



\_\_\_\_\_ tens = \_\_\_\_\_

---



\_\_\_\_\_ tens and \_\_\_\_\_ more is \_\_\_\_\_