

Name _____

My Homework

Lesson 5


Vertical Addition

Homework Helper




Need help? connectED.mcgraw-hill.com

You can add across or you can add down.



$$6 + 3 = 9$$

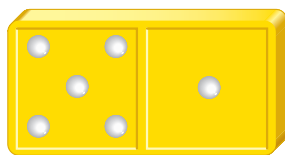


$$\begin{array}{r} 6 \\ + 3 \\ \hline 9 \end{array}$$

Practice


Write the numbers. Add.

1.



$$\underline{\quad} + \underline{\quad} = \underline{\quad}$$

2.



$$\begin{array}{r} \square \\ + \square \\ \hline \square \end{array}$$

Add.

3. $2 + 6 = \underline{\quad}$

4. $2 + 2 = \underline{\quad}$

5. $1 + 4 = \underline{\quad}$

Add.

$$\begin{array}{r} 6. \quad 2 \\ + 7 \\ \hline \end{array}$$

$$7. \quad 2 + 3 = \underline{\quad}$$

$$\begin{array}{r} 8. \quad 1 \\ + 6 \\ \hline \end{array}$$

9. There are 2 **birds** in a nest.
2 more **birds** fly to the nest.
How many **birds** are there
in all?


$$\begin{array}{r} \square \\ + \square \\ \hline \square \\ \text{birds} \end{array}$$

10. There are 5 **children** hiking.
Then 3 more **children** join
them. How many **children**
are hiking in all?

$$\begin{array}{r} \square \\ + \square \\ \hline \square \\ \text{children} \end{array}$$

Test Practice

11.



$$\begin{array}{r} 4 \\ + 5 \\ \hline \square \end{array}$$

1
○

3
○

8
○

9
○



Math at Home Give your child an addition number sentence. Have your child show how to add across and down.