

Name _____

My Homework

Lesson 10


Use Models to Compare Numbers

Homework Helper

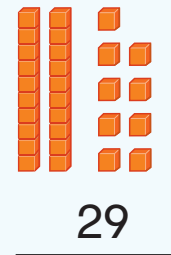


Need help? connectED.mcgraw-hill.com

You can use models to compare numbers.

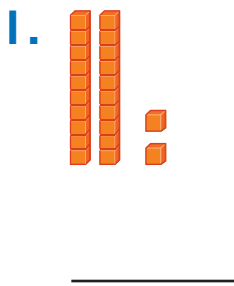


is greater than
is less than
is equal to

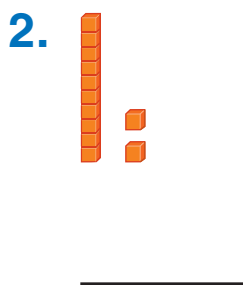
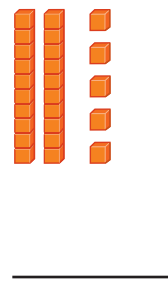


Practice

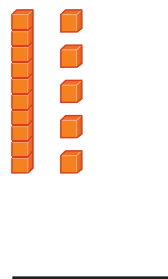
Write each number. Circle *is greater than*, *is less than*, or *is equal to*.





is greater than
is less than
is equal to




is greater than
is less than
is equal to



Write each number. Circle *is greater than*, *is less than*, or *is equal to*.



is greater than
is less than
is equal to



is greater than
is less than
is equal to

5. Aubrey read 29 books and Eli read 52 books. Who read less books?

Test Practice

6. A number is greater than 11 and less than 13. What is the number?

10



12



15



20



Math at Home Write a number. Have your child name two numbers that are less than the number and two numbers that are greater. Ask your child what number is equal to the number.