

Name \_\_\_\_\_

# My Homework

## Lesson 4


### Ten and Some More

### Homework Helper



Need help? [connectED.mcgraw-hill.com](http://connectED.mcgraw-hill.com)

You can count groups of ten and some more.




2 tens and 3 more is 23.

### Helpful Hint


Count tens and then count ones.

## Practice

Count. Circle groups of ten. Write the numbers.



\_\_\_\_\_ tens and \_\_\_\_\_ more is \_\_\_\_\_.




\_\_\_\_\_ ten and \_\_\_\_\_ more is \_\_\_\_\_.

Count. Circle groups of ten. Write the numbers.



\_\_\_\_\_ tens and \_\_\_\_\_ more is \_\_\_\_\_.



\_\_\_\_\_ tens and \_\_\_\_\_ more is \_\_\_\_\_.

5. Sarai has 30 rings. She gets 2 more rings.  
How many rings does Sarai have?

\_\_\_\_\_ rings

## Test Practice

6. Paul is thinking of a number. It has 6 groups of ten and 3 more. What is the number?

63

36

9

3



**Math at Home** Have your child count some cereal by ones. Then make groups of ten and some more. Ask your child how many pieces of cereal in all.