

Name _____

My Homework

Lesson 5

Add Tens and Ones with Regrouping

Homework Helper

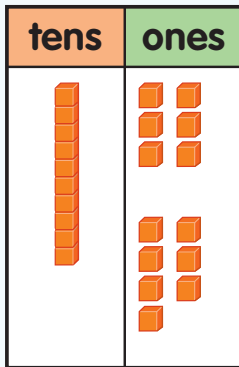


Need help? connectED.mcgraw-hill.com

Find $16 + 7$.

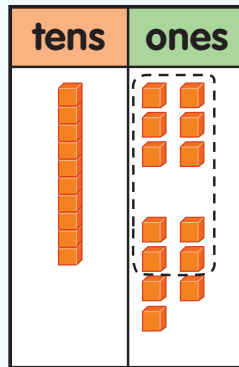
Step 1

Count the ones.



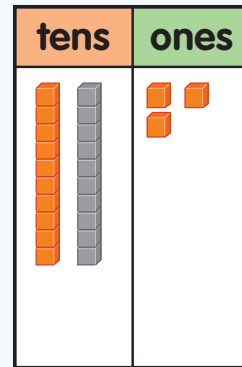
Step 2

Circle 10 ones.



Step 3

Regroup 10 ones as 1 ten.

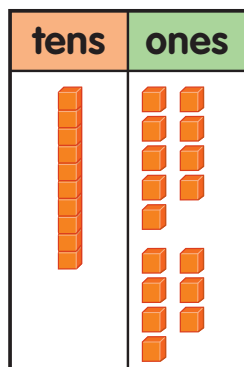


So, $16 + 7 = 23$.

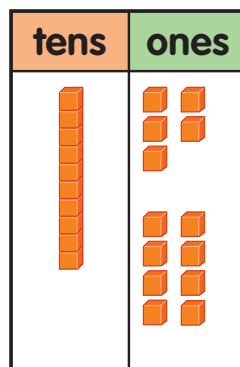
Practice

Circle the ones to show regrouping. Write your answer.

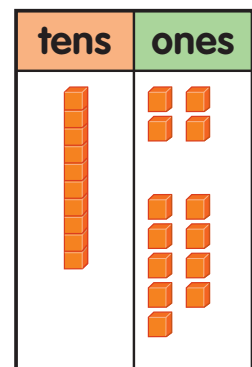
1. $19 + 7 =$ _____



2. $15 + 8 =$ _____

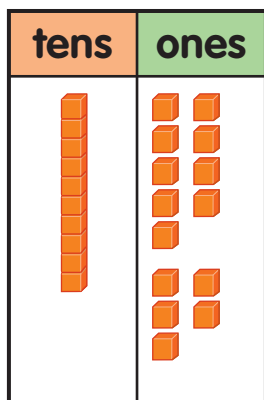


3. $14 + 9 =$ _____

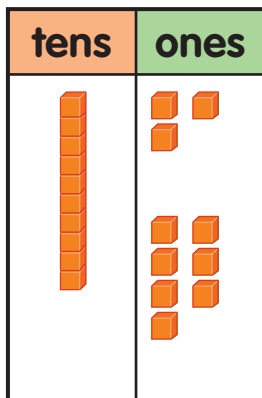


Circle the ones to show regrouping. Write your answer.

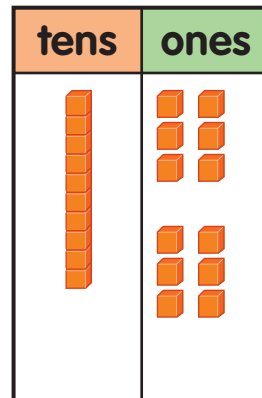
4. $19 + 5 =$ _____



5. $13 + 7 =$ _____



6. $16 + 6 =$ _____



7. There are 16 children in a ballet class.
5 more children join. How many children
are in the class now?

_____ children

Test Practice

8. Find $15 + 6$.

21



20



19



15



Math at Home Ask your child to explain how to find $12 + 9$.