

Name \_\_\_\_\_

# My Homework

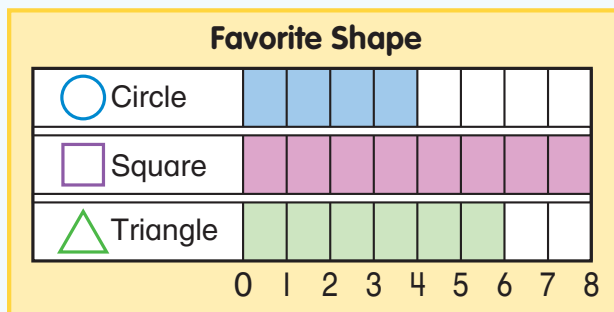
Lesson 6

Read Bar Graphs

## Homework Helper

Need help? [connectED.mcgraw-hill.com](http://connectED.mcgraw-hill.com)

The bars on a bar graph tell how many.  
Look where each bar ends. Read the number.

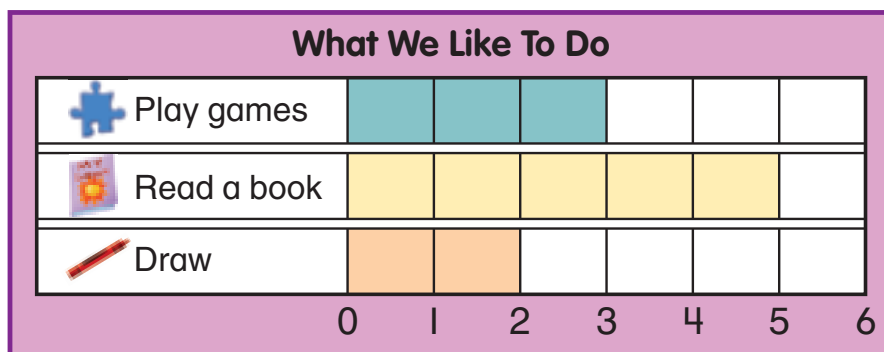


Which shape has  
the most votes?

square

## Practice

Use the graph to answer the questions.

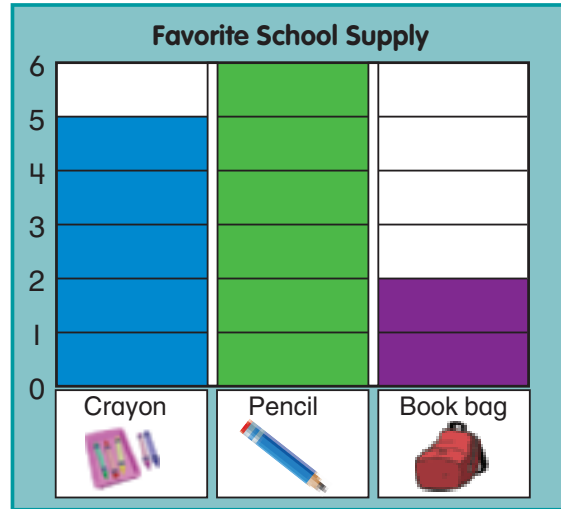


- How many students like to draw? \_\_\_\_\_
- Which activity got fewer votes than playing games?  
\_\_\_\_\_

Use the graph to answer the questions.

3. How many students voted for pencil?  
\_\_\_\_\_

4. Which school supply got fewer than 3 votes?  
\_\_\_\_\_

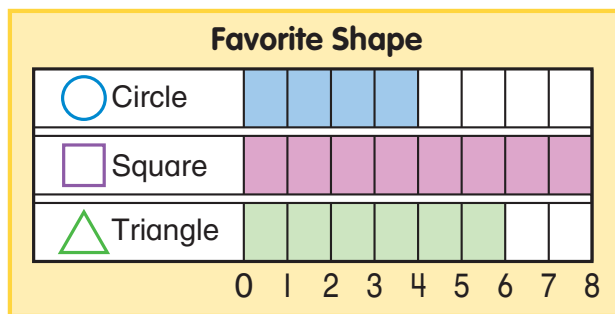


5. How many more students voted for pencil than for book bag? \_\_\_\_\_

6. How many students were surveyed in all?  
\_\_\_\_\_

## Test Practice

7. How many people were surveyed in all?



20



18



8



6



**Math at Home** Create a bar graph showing your family members' favorite season. Ask your child questions about this bar graph.