

Name _____

My Homework

Lesson 7

Time to the Half Hour: Analog

Homework Helper



Need help? connectED.mcgraw-hill.com

An analog clock can show time to the half hour.



half past 12



half past 7

Helpful Hint

One half hour is 30 minutes. It is also called half past.

Practice

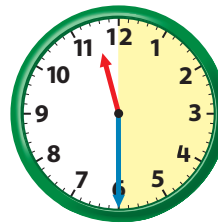
Tell what time is shown. Write the time.

1.



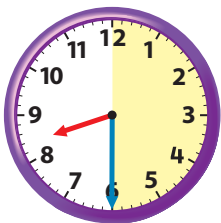
half past _____

2.



half past _____

3.



half past _____

4.



half past _____

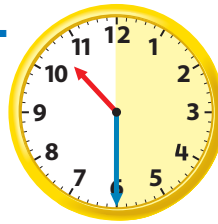
Tell what time is shown. Write the time.

5.



half past _____

6.



half past _____

7. Tim has swimming practice at 7 o'clock. The swimming practice ends 30 minutes later. What time does it end?

half past _____

8. Trish's bus picks her up at 9 o'clock. She arrives at school 30 minutes later. What time does she arrive at school?

half past _____

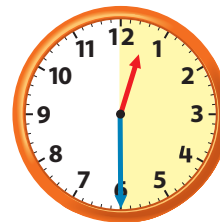
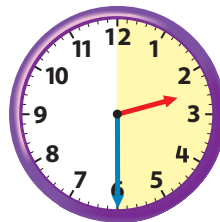


Vocabulary Check



Circle the matching time.

9. A **half hour** or half past 12 o'clock.



Math at Home Give your child a time to the hour. Have him or her tell you where the clock hands would be for half past that hour.