

Name

My Homework

Lesson 9

Halves

Homework Helper



Need help? connectED.mcgraw-hill.com

A shape that is divided into 2 equal parts is divided into halves.



2 equal parts, or 2 halves

Practice

Write how many equal parts make up the whole.



_____ equal parts




_____ equal parts

Draw lines to show two equal parts. Write how many halves.



_____ halves



_____ halves

A half of each shape is missing. Draw the missing half.

5.

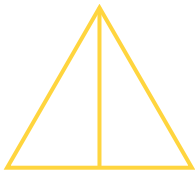


6.




Color half of each shape. Write how many parts are shaded.

7.



_____ of _____ parts

8.



_____ of _____ parts


9. Two friends share an apple equally.
How many equal parts are there?

_____ equal parts

Vocabulary Check



10. Circle the shape that shows **halves**.



Math at Home Ask your child to use yarn to divide the kitchen table into 2 equal parts. Have him or her describe the 2 parts in different ways, such as equal parts, 1 of 2 parts, or half of.