


Lesson 3 Reteach

Part of a Set


You can use a fraction to describe part of a group or set.



1 cone shaded

3 cones in all

One-third, or $\frac{1}{3}$ are shaded.



5 cones shaded

6 cones in all

Five-sixths, or $\frac{5}{6}$ are shaded.

Write the fraction for the part of the set that is shaded.
Then write the fraction for the part of the set that is *not* shaded. Label your answers.



_____ are shaded.
 _____ are not shaded.



_____ are shaded.
 _____ are not shaded.



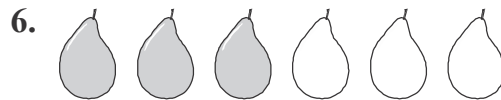
_____ are shaded.
 _____ are not shaded.



_____ are shaded.
 _____ are not shaded.



_____ are shaded.
 _____ are not shaded.



_____ are shaded.
 _____ are not shaded.