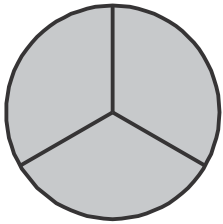


# Lesson 7 Reteach

## Fractions as One Whole

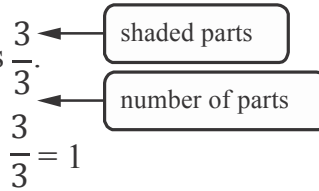
The numeral 1 can be written as many different fractions. Any time the numerator and denominator are the same, the fraction equals 1.

**Write the fraction that represents the whole shown.**



The circle is divided into 3 equal parts.  
All 3 parts of the circle are shaded.

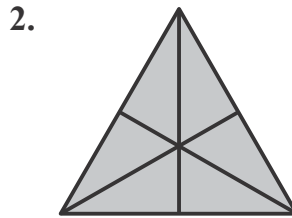
The fraction that represents the whole is  $\frac{3}{3}$ .



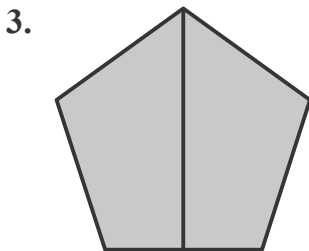
**Write the fraction that represents the whole.**



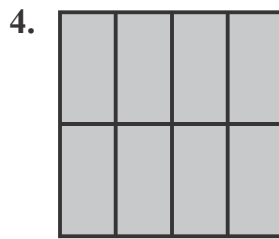
\_\_\_\_\_



\_\_\_\_\_



\_\_\_\_\_



\_\_\_\_\_