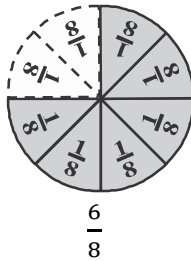
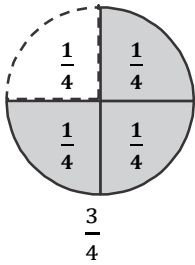


Lesson 6 Reteach

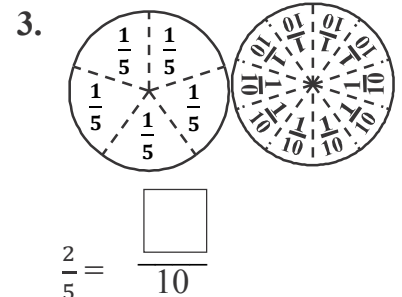
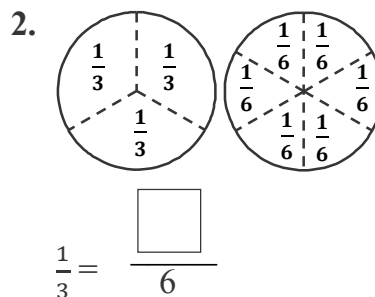
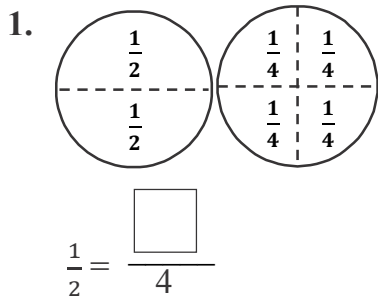
Equivalent Fractions

Fraction models can help you find fractions that name the same number, or **equivalent fractions**.



$\frac{3}{4}$ and $\frac{6}{8}$ are equivalent fractions.

Complete each number sentence with equivalent fractions.



4. $\frac{1}{4} = \frac{\square}{8}$

5. $\frac{2}{4} = \frac{\square}{8}$

6. $\frac{3}{6} = \frac{\square}{2}$

7. $\frac{6}{8} = \frac{\square}{4}$

8. $\frac{1}{3} = \frac{\square}{6}$

9. $\frac{4}{8} = \frac{\square}{2}$

10. $\frac{2}{8} = \frac{\square}{4}$

11. $\frac{4}{6} = \frac{\square}{3}$