



## Going to the Movies




*Attack of the 50ft Turnip* plays at 7:10. It is now quarter to seven. How long before the movie starts?

\_\_\_\_\_




It takes 30 minutes to drive to the movie theater. *They Saved Frankenstein's Lunch* begins playing at ten after 1. What is the latest you can leave home?

\_\_\_\_\_




*Mikey Mongoose* begins at 2:35. It ends at 4:05. How long is the movie?

\_\_\_\_\_



You and your friend meet at the movie theater to see *Flying Ninja Toenails of Death*. You arrive at 5:40. Your friend arrives at 6:12. How long did you wait for your friend to arrive?

\_\_\_\_\_




*Nuthouse Rocks* begins at 5:20. It is 1 hour and 50 minutes long. What time does the movie end?

\_\_\_\_\_


# ANSWER KEY

## Going to the Movies




Attack of the 50ft Turnip plays at 7:10. It is now quarter to seven. How long before the movie starts?

**25 minutes**




It takes 30 minutes to drive to the movie theater. *They Saved Frankenstein's Lunch* begins playing at ten after 1. What is the latest you can leave home?

**12:40**




Mikey Mongoose begins at 2:35. It ends at 4:05. How long is the movie?

**1 hour 30 minutes**



You and your friend meet at the movie theater to see *Flying Ninja Toenails of Death*. You arrive at 5:40. Your friend arrives at 6:12. How long did you wait for your friend to arrive?

**32 minutes**



*Nuthouse Rocks* begins at 5:20. It is 1 hour and 50 minutes long. What time does the movie end?

**7:10**