



Name: _____


Fact Family Arrays


Write the fact family shown by each array.

ejemplo



$$\begin{array}{r} 3 \times 5 = 15 \\ \hline 5 \times 3 = 15 \\ \hline 15 \div 3 = 5 \\ \hline 15 \div 5 = 3 \end{array}$$



















ANSWER KEY

Fact Family Arrays

Escribe una familia de operaciones mostrada por cada matriz.

ejemplo




$$3 \times 5 = 15$$

$$5 \times 3 = 15$$

$$15 \div 3 = 5$$

$$15 \div 5 = 3$$



$$4 \times 7 = 28$$

$$7 \times 4 = 28$$

$$28 \div 4 = 7$$

$$28 \div 7 = 4$$




$$4 \times 5 = 20$$

$$5 \times 4 = 20$$

$$20 \div 4 = 5$$

$$20 \div 5 = 4$$



$$3 \times 9 = 27$$

$$9 \times 3 = 27$$

$$27 \div 3 = 9$$

$$27 \div 9 = 3$$



$$2 \times 5 = 10$$

$$5 \times 2 = 10$$

$$10 \div 2 = 5$$

$$10 \div 5 = 2$$




$$2 \times 3 = 6$$

$$3 \times 2 = 6$$

$$6 \div 2 = 3$$

$$6 \div 3 = 2$$




$$3 \times 12 = 36$$

$$12 \times 3 = 36$$

$$36 \div 3 = 12$$

$$36 \div 12 = 3$$




$$4 \times 6 = 24$$

$$6 \times 4 = 24$$

$$24 \div 4 = 6$$

$$24 \div 6 = 4$$



$$7 \times 9 = 63$$

$$9 \times 7 = 63$$

$$63 \div 7 = 9$$

$$63 \div 9 = 7$$