

Name: _____

Time to the Nearest 5 Minutes

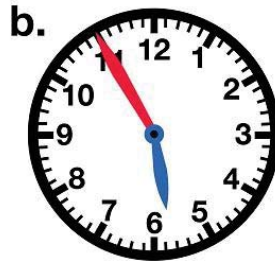
Telling Time

To the Nearest 5 Minutes

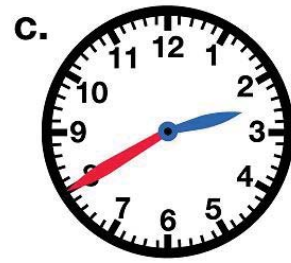
Write the time shown on each clock.



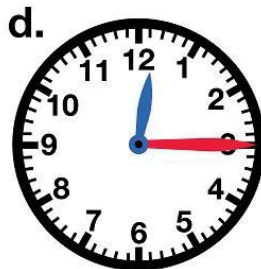
___ : ___



___ : ___



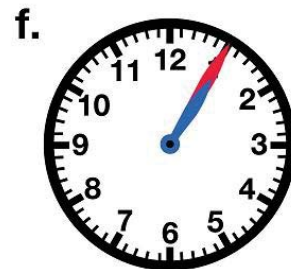
___ : ___



___ : ___



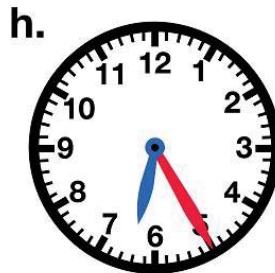
___ : ___



___ : ___



___ : ___



___ : ___



___ : ___

Name: _____

Time to the Nearest 5 Minutes

ANSWER KEY

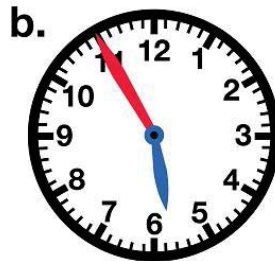
Telling Time

To the Nearest 5 Minutes


Write the time shown on each clock.



3:10



5:55



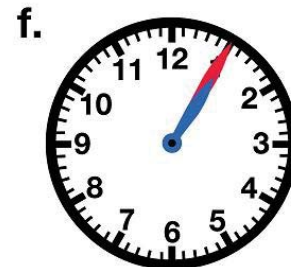
2:40



12:15




9:20



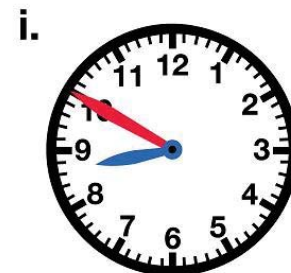
1:05



4:45



6:25



8:50