
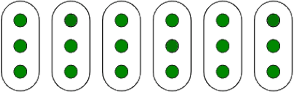


Name:

Weekly Homework Sheet Q1:5

Date:

Monday	Tuesday	Wednesday	Thursday
Order the numbers from GREATEST to LEAST. 332 233 323	Circle all the ODD numbers. 87 24 54 83 99 38	Order the numbers from LEAST to GREATEST. 728 826 688	Circle all the EVEN numbers. 78 25 14 77 83 70
Round each number to the nearest 10. 75 _____ 283 _____ 199 _____	Round each number to the nearest 100. 128 _____ 976 _____ 553 _____	Round each number to the nearest 10. 66 _____ 365 _____ 439 _____	Round each number to the nearest 100. 834 _____ 719 _____ 662 _____
Find the Sum. $\begin{array}{r} 249 \\ + 548 \\ \hline \end{array}$	Estimate the Sum of 299 and 388.	Find the Sum. $\begin{array}{r} 190 \\ + 768 \\ \hline \end{array}$	Find the Sum of 914 and 878.
Find the Difference. $\begin{array}{r} 825 \\ - 385 \\ \hline \end{array}$	Estimate the difference between 206 and 167.	Find the Difference. $\begin{array}{r} 701 \\ - 413 \\ \hline \end{array}$	Find the difference between 783 and 366.
Find the missing addend. $78 + \underline{\quad} = 99$	Find the missing addend. $\underline{\quad} + 64 = 177$	Find the missing addend. $98 + \underline{\quad} = 223$	Find the missing addend. $\underline{\quad} + 79 = 154$
Solve 5×10 . Draw a model to show your answer.	Solve 3×4 . Draw a model to show your answer.	Solve 7×7 . Draw a model to show your answer.	Solve 6×10 . Draw a model to show your answer.
Solve. $4+4+4=$ $2+2+2+2+2=$ $7+7+7+7=$ $3+3=$ $9+9+9+9=$	What multiplication problem is being modeled by this array? 	Draw an array for 4×2 .	Solve 5×4 using repeated addition.
Fill in the blanks. _____ groups of _____ 	Draw an array for 3×5	Draw two arrays that represent 12.	Solve 8×3 using repeated addition.

My Work

Monday	Tuesday
Wednesday	Thursday



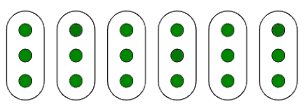

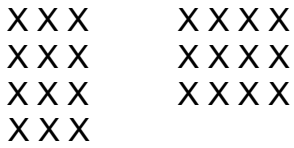
My Progress

MONDAY	TUESDAY	WEDNESDAY	THURSDAY
# of questions _____	# of questions _____	# of questions _____	# of questions _____
# correct _____	# correct _____	# correct _____	# correct _____
I need more help with...	I need more help with...	I need more help with...	I need more help with...
_____	_____	_____	_____
_____	_____	_____	_____
_____	_____	_____	_____
_____	_____	_____	_____

_____	_____	_____	_____
_____	_____	_____	_____
_____	_____	_____	_____
_____	_____	_____	_____
_____	_____	_____	_____

Answer Key - Weekly Homework Sheet Q1:5

Monday	Tuesday	Wednesday	Thursday
Order the numbers from GREATEST to LEAST. 332 233 323 332, 323, 233	Circle all the ODD numbers. 87 24 54 83 99 38 87, 83, 99	Order the numbers from LEAST to GREATEST. 728 826 688 688, 728, 826	Circle all the EVEN numbers. 78 25 14 77 83 70 78, 14, 70
Round each number to the nearest 10. 75 _____ 80 283 _____ 280 199 _____ 200	Round each number to the nearest 100. 128 _____ 100 976 _____ 1,000 553 _____ 600	Round each number to the nearest 10. 66 _____ 70 365 _____ 370 439 _____ 440	Round each number to the nearest 100. 834 _____ 800 719 _____ 700 662 _____ 700
Find the Sum. 2 4 9 + 5 4 8 ----- 7 9 7	Estimate the Sum of 299 and 388. 700	Find the Sum. 1 9 0 + 7 6 8 ----- 9 5 8	Find the Sum of 914 and 878. 1,800
Find the Difference. 8 2 5 - 3 8 5 ----- 4 4 0	Estimate the difference between 206 and 167. 30	Find the Difference. 7 0 1 - 4 1 3 ----- 2 8 8	Find the difference between 783 and 366. 417
Find the missing addend. 78 + 21 = 99	Find the missing addend. 113 + 64 = 177	Find the missing addend. 98 + 125 = 223	Find the missing addend. 75 + 79 = 154
Solve 5 x 10. Draw a model to show your answer. 50	Solve 3 x 40. Draw a model to show your answer. 12	Solve 7 x 7. Draw a model to show your answer. 49	Solve 6 x 10. Draw a model to show your answer. 60

<p>Solve.</p> <p>$4+4+4=12$</p> <p>$2+2+2+2+2=10$</p> <p>$7+7+7+7=28$</p> <p>$3+3=6$</p> <p>$9+9+9+9=36$</p>	<p>What multiplication problem is being modeled by this array?6×4</p> 	<p>Draw an array for 4×2.</p> 	<p>Solve 5×4 using repeated addition.</p> <p>$5+5+5+5 = 20$</p>
<p>Fill in the blanks.</p> <p><u>6</u> groups of <u>3</u></p> 	<p>Draw an array for 3×5</p> 	<p>Draw two arrays that represent 12.</p> 	<p>Solve 8×3 using repeated addition.</p> <p>$8 + 8 + 8 = 24$</p>