

Name _____

MY Homework

Lesson 4

Multiply by 5

Homework Helper

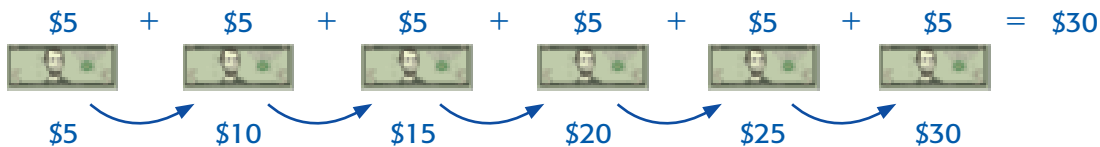


Need help? connectED.mcgraw-hill.com

There are 6 students. Each student donates \$5 to a school fundraiser. How much money did the students donate in all?

Find $6 \times \$5$.

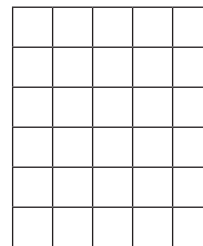
One Way Skip count by fives.



Another Way Draw an array.

6 rows of 5 = 30

So, the 6 students donated a total of \$30.



Practice

Write an addition sentence to help find each product.

1. $3 \times 5 =$ _____

2. $8 \times 5 =$ _____

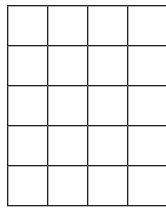
3. $5 \times 5 =$ _____

Write a multiplication sentence for each array.


4. 1 row of 5



5. 5 rows of 4




6. 5 rows of 9




Problem Solving

7. Each pair of tennis shoes costs \$25. If Andrea has four \$5-bills, does she have enough money to buy one pair? Write a number sentence. Then solve.

8. For each balloon game you win at the fair, you get 5 tickets. Jamal won 9 balloon games. Gary won 6 balloon games. Do they have enough tickets altogether for a prize that is worth 100 tickets? Explain.

9. **Mathematical PRACTICE**  **Make Sense of Problems** For a craft, each student will need 5 rubber bands. There are 8 students. Rubber bands come in bags of 9. How many bags will be needed? How many rubber bands will be left over?

My Work!



Test Practice

10. Shawn has 4 nickels. How many walnuts can he buy if he spends all 4 nickels?

- (A) 1 walnut (C) 5 walnuts
(B) 4 walnuts (D) 20 walnuts

