




## Problem Solving



My Word!

- 17.** Brandon's dentist gave him 12 toothbrushes. Brandon wants to share them equally among himself and his 2 friends. How many toothbrushes will each person get? Write a division sentence.
- 18.** A teacher has 24 pencils. She keeps 4 and shares the others equally with 5 students. How many pencils did each student get?
- 19.** Circle the number sentence that does not belong. Explain. Then write the missing number sentence.

$$3 \times 6 = 18$$

$$18 \div 2 = 9$$

$$18 \div 6 = 3$$

$$6 \times 3 = 18$$

## Test Practice

- 20.** Harper saved \$30 from mowing lawns April through September. She saved an equal amount each month. How much money did Harper save each month?
- (A) \$5                      (C) \$8
- (B) \$6                      (D) \$10

# Concept Check



Use counters to find how many are in each group.

9. 14 counters

2 equal groups

$$\div =$$

in each group

10. 25 counters

5 equal groups

$$\div =$$

in each group


Use repeated subtraction to divide.

11.



$$12 \div 6 =$$

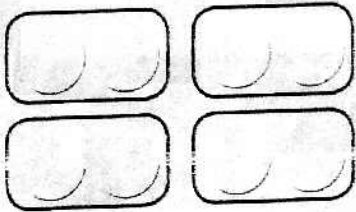
12.




$$20 \div 4 =$$

Write a related division and multiplication sentence for each.

13.



14.



Write the fact family for each set of numbers.

15. 4, 7, 28

16. 3, 9, 27