

MY Homework

Lesson 1

Hands On: Model Multiplication

Homework Helper



Need help? connectED.mcgraw-hill.com

Gina put 3 scoops of frozen yogurt in each bowl. There are 6 bowls. How many scoops of frozen yogurt are there?

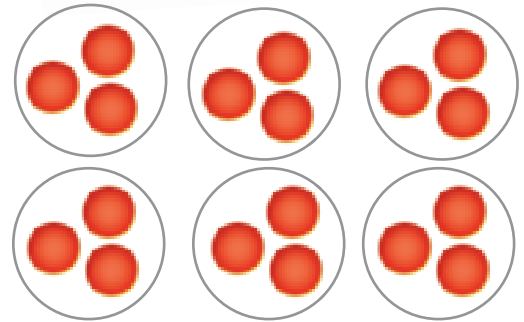
1 The model shows the total number of scoops.

There are 6 bowls, and each has 3 scoops. There are 6 groups of 3.

2 Use repeated addition to find the total.

$$3 + 3 + 3 + 3 + 3 + 3 = 18$$

There are 18 scoops of frozen yogurt.



Practice

Draw a model to find the total number. **1–4. See students' drawings.**

1. 2 groups of 8 equals 16

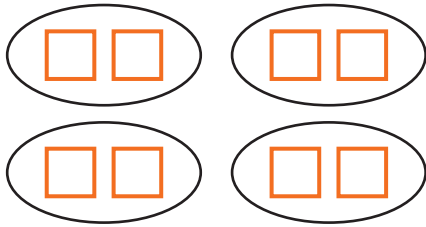
2. 5 groups of 7 equals 35

3. $6 \times 4 =$ 24

4. $4 \times 8 =$ 32

Describe each set of equal groups.


5.



$$\underline{2} + \underline{2} + \underline{2} + \underline{2} = \underline{8}$$

$$\underline{4} \text{ groups of } \underline{2} = \underline{8}$$

6.



$$\underline{5} + \underline{5} + \underline{5} = \underline{15}$$

$$\underline{3} \text{ groups of } \underline{5} = \underline{15}$$

7. $6 \times 5 = \underline{30}$

$$\underline{6} \text{ groups of } \underline{5} = \underline{30}$$

8. $3 \times 4 = \underline{12}$

$$\underline{3} \text{ groups of } \underline{4} = \underline{12}$$



Problem Solving

Mathematical
PRACTICE



Model Math Complete each number sentence.

9. Paulina played 3 soccer games on Saturday. She drank 1 juice box during each soccer game. How many juice boxes did she drink?

$$\underline{1} + \underline{1} + \underline{1} = \underline{3} \text{ juice boxes}$$

10. Daniel, Jamie, Molly, and Corey each have 4 books from the library. How many books do they have in all?

$$\underline{4} + \underline{4} + \underline{4} + \underline{4} = \underline{16} \text{ library books}$$

Vocabulary Check



11. Choose the correct word(s) to complete the sentence below.

equal groups

multiplication

You can use multiplication to find the total number of objects in equal groups.