

MY Homework

Lesson 4

Hands On: Relate Division and Multiplication


Homework Helper



Need help? connectED.mcgraw-hill.com

Find $32 \div 4$.

- 1 Model 32 counters divided into 4 equal groups. There are 8 counters in each group.



- 2 Write a division sentence.

$$\begin{array}{ccc} 32 & \div & 4 & = & 8 \\ \uparrow & & \uparrow & & \uparrow \\ \text{dividend} & & \text{divisor} & & \text{quotient} \end{array}$$


- 3 Write a multiplication sentence.

$$\begin{array}{ccc} 4 & \times & 8 & = & 32 \\ \uparrow & & \uparrow & & \uparrow \\ \text{number of groups} & & \text{number in each group} & & \text{number in all} \end{array}$$

So, $32 \div 4 = 8$.

Practice

Write a related division and multiplication sentence for each.






Problem Solving

Draw a model to solve. Then write a division sentence.

3. 42 students need to divide equally into 7 vans going to the museum. How many students will be in each van?

4. **Mathematical PRACTICE**  **Model Math** Carla is giving out pencils to 30 students. The students are divided equally among 6 tables. How many pencils will Carla leave at each table?

5. Mr. Rina has 7 glass figures. He will use 1 box to mail each glass figure to a customer. How many boxes does Mr. Rina need?

My Drawing!

Vocabulary Check



Use the vocabulary to label each number in the division sentence.

quotient

divisor

dividend

6.

$$48 \div 8 = 6$$

8.

7.