

## Chapter 6 Test Review

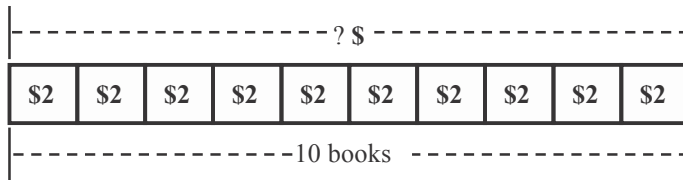
Read each question carefully. Write the letter for your answer on the line provided.

1.  $9 \times 2 =$   
A. 16                      B. 18                      C. 20                      D. 24                      1. \_\_\_\_\_
2.  $8 \times 5 =$   
F. 12                      G. 24                      H. 40                      I. 48                      2. \_\_\_\_\_
3.  $9 \times 5 =$   
A. 20                      B. 40                      C. 45                      D. 50                      3. \_\_\_\_\_
4.  $10 \times 6 =$   
F. 30                      G. 40                      H. 50                      I. 60                      4. \_\_\_\_\_
5.  $16 \div 2 =$   
A. 4                      B. 8                      C. 12                      D. 32                      5. \_\_\_\_\_
6.  $25 \div 5 =$   
F. 20                      G. 9                      H. 8                      I. 5                      6. \_\_\_\_\_
7.  $40 \div 5 =$   
A. 8                      B. 9                      C. 16                      D. 20                      7. \_\_\_\_\_
8. There are 2 spiders. Each spider has 8 legs. How many legs are there in all?  
F. 10 legs                      G. 11 legs                      H. 15 legs                      I. 16 legs                      8. \_\_\_\_\_
9. Kennedy went to a car show and saw 70 cars. If she saw 10 of each type of car, how many different types of cars were there?  
A. 16 types                      B. 12 types                      C. 10 types                      D. 7 types                      9. \_\_\_\_\_
10. The zoo has 20 pink flamingos. They are divided equally into 5 sections of the zoo. How many flamingos are in each section?  
F. 10 flamingos                      G. 8 flamingos                      H. 4 flamingos                      I. 2 flamingos                      10. \_\_\_\_\_

## Chapter 6 Test Review *(continued)*

Read each question carefully. Write your answer on the line provided.

11. Use the bar diagram to solve. Barry bought 10 books at the book sale. Each book cost \$2. How much did Barry spend altogether?



11. \_\_\_\_\_

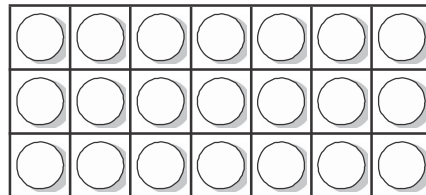
12. Use the table to solve. The recipe below is for 1 batch of blueberry muffins. How many cups of blueberries are needed if 2 batches are made?

1 Batch of Blueberry Muffins

Eggs	2
Flour	2 cups
Sugar	1 cup
Oil	1 cup
Blueberries	3 cups

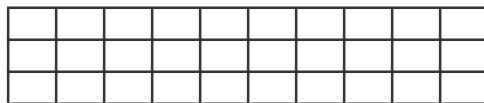
12. \_\_\_\_\_

13. Write a division sentence to match the groups of counters.



13. \_\_\_\_\_

14. The figure below is a model for  $3 \times 10 = 30$ .



14. \_\_\_\_\_

Write a number sentence that is in the same fact family.