

Name \_\_\_\_\_

# MY Homework

## Lesson 3

### Hands On: Double a Known Fact

## Homework Helper




Need help? [connectED.mcgraw-hill.com](http://connectED.mcgraw-hill.com)

**Find  $6 \times 5$ .**

Decompose, or separate, the factor 6 into two equal addends of  $3 + 3$ . Then you can double the known fact,  $3 \times 5$ .

**1 Model the known fact,  $3 \times 5$ .**


Use counters to make an array that shows 3 rows of 5.



$$3 \times 5 = 15$$

**2 Double the known fact.**

Make another array that shows 3 rows of 5.



$$3 \times 5 = 15$$


**3 Find  $6 \times 5$ .**

Push the two arrays together into 6 rows of 5.

Add the products from the two arrays:

$$15 + 15 = 30$$

The combined arrays show  $6 \times 5 = 30$ .



$$6 \times 5 = 30$$


## Practice

1. Draw counters to model a known fact that will help you find  $4 \times 5$ . Draw the model two times.

$$4 \times 5 = \underline{20}$$

$$\text{Known fact: } 2 \times 5 = \underline{10}$$

$$\text{Double the product: } 10 + 10 = \underline{20}$$



Double the known fact. Write the product it helps you find.

2.  $3 \times 7 = \underline{21}$

$3 \times 7 = \underline{21}$

$\underline{6} \times \underline{7} = \underline{42}$

3.  $3 \times 3 = \underline{9}$

$3 \times 3 = \underline{9}$

$\underline{6} \times \underline{3} = \underline{18}$

4.  $2 \times 6 = \underline{12}$

$2 \times 6 = \underline{12}$

$\underline{4} \times \underline{6} = \underline{24}$

5.  $2 \times 9 = \underline{18}$

$2 \times 9 = \underline{18}$

$\underline{4} \times \underline{9} = \underline{36}$



## Problem Solving


Double a known fact to solve.

6. Dr. Berry sees 3 patients every hour. If she works 8 hours, how many patients does she see?

$3 \times 4 = 12; 12 + 12 = 24$  patients

7. The Johnson twins and the Clayton twins went to the fair. Each child rode 5 rides. What is the total number of times all four children went on a ride?

$2 \times 5 = 10; 10 + 10 = 20$  times

8. **Mathematical PRACTICE**  **Identify Structure** Vince drinks 4 large glasses of water each day. How many glasses of water does Vince drink in 7 days?

$2 \times 7 = 14; 14 + 14 = 28$  glasses

My Work!

## Vocabulary Check

Choose the correct word(s) to complete each sentence.

known fact

decompose

9. One way to decompose the number 8 is to write it as  $4 + 4$ .
10. A fact that you have memorized is a known fact.