

Name \_\_\_\_\_

# MY Homework

## Lesson 5

### Write Expressions

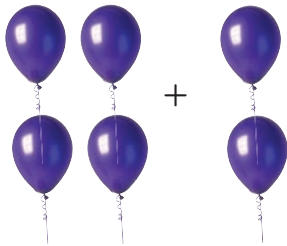
## Homework Helper



Need help? [connectED.mcgraw-hill.com](http://connectED.mcgraw-hill.com)

Charles filled 4 balloons for the party. Model each of the following situations with pictures, numbers, and words.


Charles filled 2 more balloons.



Numbers:  $4 + 2$

Words: four plus two

Charles filled twice as many balloons.



Numbers:  $4 \times 2$

Words: four times two


One balloon floats away.



Numbers:  $4 - 1$

Words: one less than four

Charles gives half of the balloons to Lia.



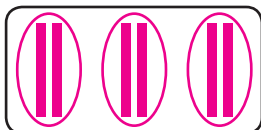
Numbers:  $4 \div 2$

Words: half of four

## Practice

- Annette has 6 pencils. She divides them evenly among 3 friends. Model the expression with a picture, numbers, and words.

Picture



Numbers

$$6 \div 3$$

Words

six divided by three

Use numbers and operations to write each phrase as an expression.

2. 4 boxes with 2 shoes in each

$$4 \times 2$$

3. the difference between 58 and 47

$$58 - 47$$

4. 5 more than 12

$$12 + 5$$

5. 30 books shared equally by 10 people

$$30 \div 10$$



## Problem Solving

Mathematical  
**PRACTICE**



**Model Math** Write an expression for each situation.

6. Stella read all but one of the 5 books she took on vacation.

$$5 - 1$$

7. Ms. Benson had a box of 8 popsicles. She bought another box of 4 popsicles. Ms. Benson divided the popsicles among her 2 children.

$$(8 + 4) \div 2$$

8. Frieda bought 3 packs of 8 candles. Then she found 1 candle at home.

$$(3 \times 8) + 1$$

## Vocabulary Check



Match each vocabulary word with its example.

9. expression  $7 \times 4$

10. operations  $+, -, \times, \text{ and } \div$

## Test Practice

11. Zoe had 9 bracelets. She lost 1 and gave 3 to Blaire. Which expression matches the situation?

(A)  $9 - 3$

(C)  $9 - 1 - 3$

(B)  $(9 - 1) + (9 - 3)$

(D)  $(9 - 1) + 3$