


Name: _____


Fractions of a Set



1. What fraction of the shapes are triangles? _____
2. What fraction of the stars are gray? _____
3. What fraction of the circles are white? _____

4. What fraction of the houses have a chimney? _____

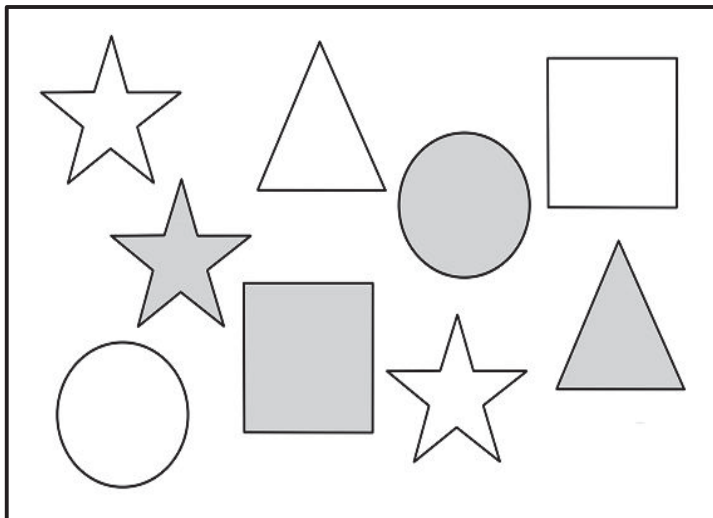
5. What fraction of the houses have two or more windows? _____



6. What fraction of the crayons are broken? _____
7. What fraction of the crayons are yellow? _____
8. What fraction of the pink crayons are broken? _____


ANSWER KEY

Fractions of a Set



1. What fraction of the shapes are triangles? **2/9**
2. What fraction of the stars are gray? **1/3**
3. What fraction of the circles are white? **1/2**

4. What fraction of the houses have a chimney? **2/4 or 1/2**
5. What fraction of the houses have two or more windows? **4/4 or 1**



6. What fraction of the crayons are broken? **4/10 or 2/5**
7. What fraction of the crayons are yellow? **3/10**
8. What fraction of the pink crayons are broken? **2/3**