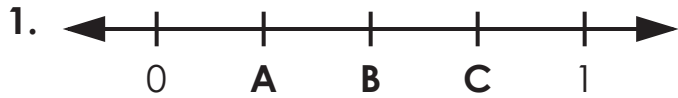


Name: _____

Number Lines

Write the fraction or mixed number represented by the letters on the number lines.



A = _____

B = _____

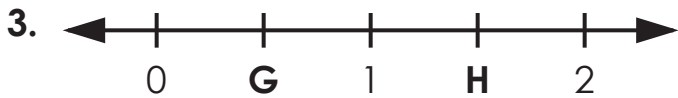
C = _____



D = _____

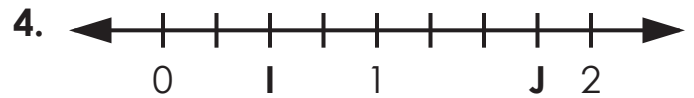
E = _____

F = _____



G = _____

H = _____



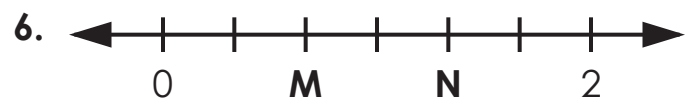
I = _____

J = _____



K = _____

L = _____



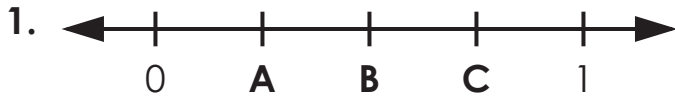
M = _____

N = _____

ANSWER KEY

Number Lines

Write the fraction or mixed number represented by the letters on the number lines.



$$A = \frac{1}{4}$$

$$B = \frac{2}{4} \text{ or } \frac{1}{2}$$

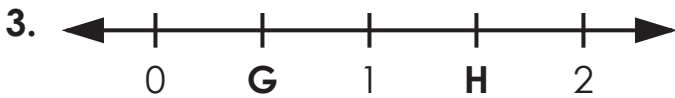
$$C = \frac{3}{4}$$



$$D = \frac{2}{5}$$

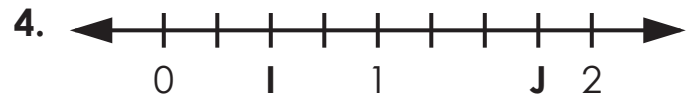
$$E = \frac{3}{5}$$

$$F = \frac{4}{5}$$



$$G = \frac{1}{2}$$

$$H = 1 \frac{1}{2}$$



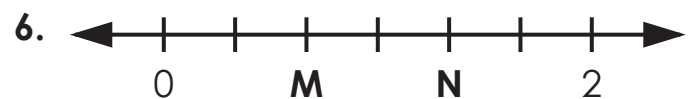
$$I = \frac{2}{4} \text{ or } \frac{1}{2}$$

$$J = 1 \frac{3}{4}$$



$$K = \frac{3}{8}$$

$$L = \frac{6}{8} \text{ or } \frac{3}{4}$$



$$M = \frac{2}{3}$$

$$N = 1 \frac{1}{3}$$