

Name: _____

Time to the Quarter Hour

Telling Time

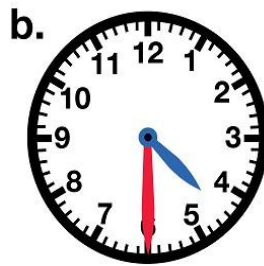
To the Nearest Quarter Hour

Write the time shown on each clock. Write it the "regular way" and the "smart way." The first one has been done for you.

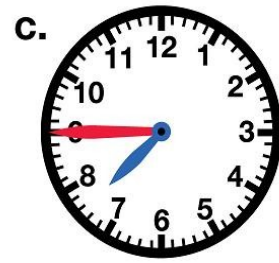


2:15

Quarter after 2



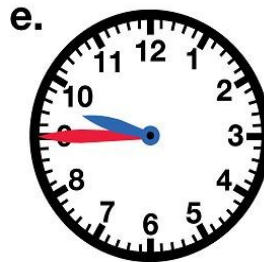
____ : ____



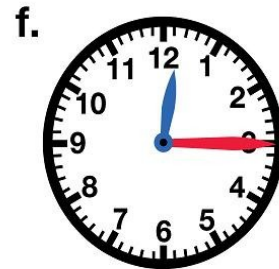
____ : ____



____ : ____



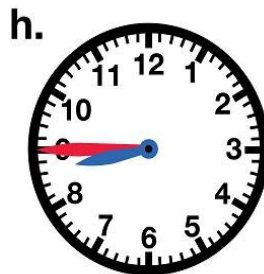
____ : ____



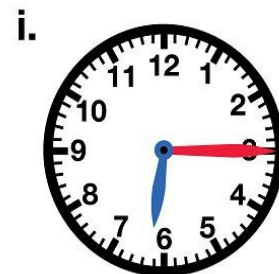
____ : ____



____ : ____



____ : ____



____ : ____

Name: _____

Time to the Quarter Hour

ANSWER KEY

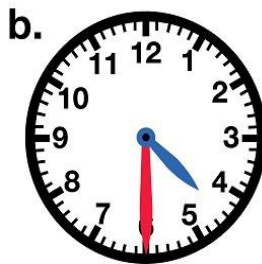
Telling Time

To the Nearest Quarter Hour

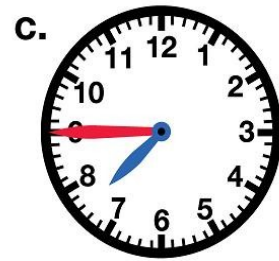
Write the time shown on each clock. Write it the "regular way" and the "smart way." The first one has been done for you.



a.
2:15
Quarter after 2



b.
4:30
Half Past 4



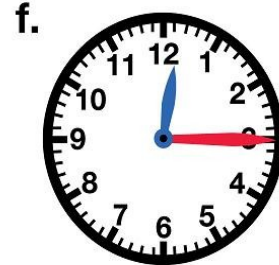
c.
7:45
Quarter to 8



d.
5:30
Half Past 5




e.
9:45
Quarter to 10



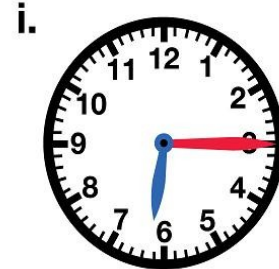
f.
12:15
Quarter After 12



g.
1:45
Quarter to 2



h.
8:45
Quarter to 9



i.
6:15
Quarter After 6