

MY Homework

Lesson 2

Polygons

Homework Helper



Need help? connectED.mcgraw-hill.com

The front of the bird house shown has the shape of a polygon. Describe and classify the polygon.

The polygon has 5 sides and 5 angles.

It is a pentagon.



Practice

Describe each shape. Determine the number of sides and angles. Then classify each shape.

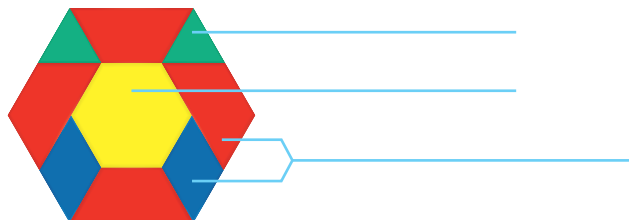
1.  _____ sides
 _____ angles

This is a(n) _____.

2.  _____ sides
 _____ angles

This is a(n) _____.


3. **Mathematical PRACTICE**  **Identify Structure** Classify the polygons that are used to create the figure shown.

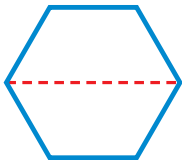




Problem Solving

4. What is another name for a square, other than *polygon*?

5. **Mathematical PRACTICE**  **Use Math Tools** Draw and label the polygon you would get when you fold the hexagon shown, in half along the dotted line.



6. Is the figure shown to the right a polygon? Explain.



Vocabulary Check



Choose the correct word to complete each sentence.

hexagon polygon quadrilateral

7. A _____ is a closed two-dimensional figure formed of three or more straight sides that do not cross each other.
8. A _____ is a polygon with 6 sides and 6 angles.
9. A _____ is a polygon with 4 sides and 4 angles.

Test Practice

10. Which of the following figures is a hexagon?

(A)



(B)



(C)



(D)

