


Name: _____

Polygons



polygon name: **parallelogram**

number of sides: **4**

pairs of parallel sides: **2**

number of right angles: **0**

Fill in the blanks for each polygon.

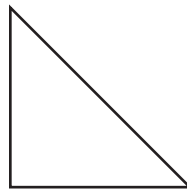


polygon name: _____

number of sides: _____

pairs of parallel sides: _____

number of right angles: _____

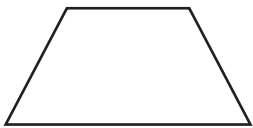


polygon name: _____

number of sides: _____

pairs of parallel sides: _____

number of right angles: _____



polygon name: _____

number of sides: _____

pairs of parallel sides: _____

number of right angles: _____

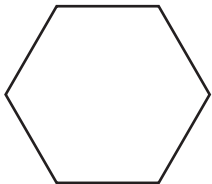


polygon name: _____

number of sides: _____

pairs of parallel sides: _____

number of right angles: _____



polygon name: _____

number of sides: _____

pairs of parallel sides: _____

number of right angles: _____



polygon name: _____


number of sides: _____

pairs of parallel sides: _____

number of right angles: _____

ANSWER KEY

Polygons




polygon name: **parallelogram**

number of sides: **4**

pairs of parallel sides: **2**

number of right angles: **0**

Fill in the blanks for each polygon.

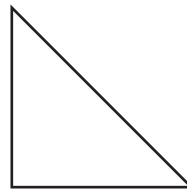


polygon name: **rectangle**

number of sides: **4**

pairs of parallel sides: **2**

number of right angles: **4**

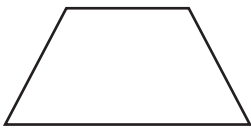


polygon name: **right triangle**

number of sides: **3**

pairs of parallel sides: **0**

number of right angles: **1**

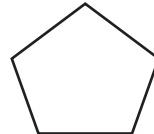


polygon name: **trapezoid**

number of sides: **4**

pairs of parallel sides: **1**

number of right angles: **0**

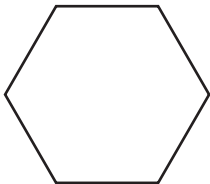


polygon name: **pentagon**

number of sides: **5**

pairs of parallel sides: **0**

number of right angles: **0**



polygon name: **hexagon**

number of sides: **6**

pairs of parallel sides: **3**

number of right angles: **0**



polygon name: **square**

number of sides: **4**

pairs of parallel sides: **2**

number of right angles: **4**