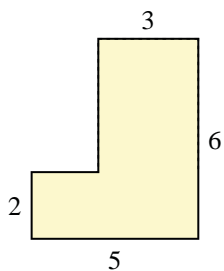




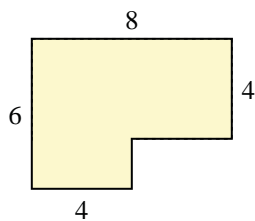
Find the total area of each shape. Measurement is in millimeters (mm). Not to scale.

Answers

1)



2)



1. _____

2. _____

3. _____

4. _____

5. _____

6. _____

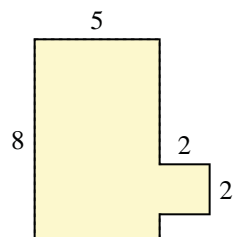
7. _____

8. _____

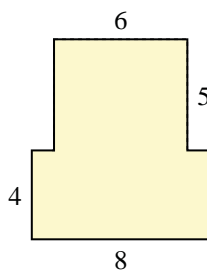
9. _____

10. _____

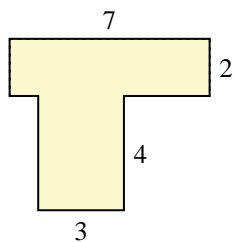
3)



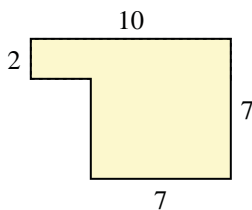
4)



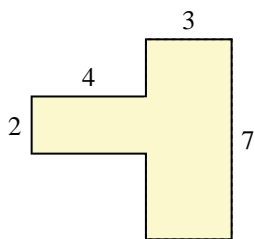
5)



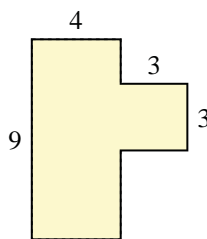
6)



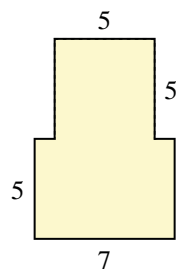
7)



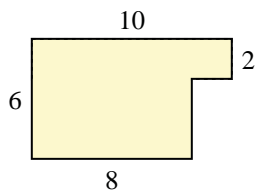
8)



9)

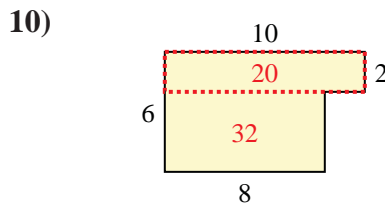
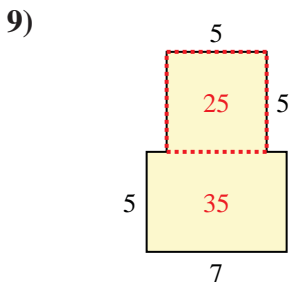
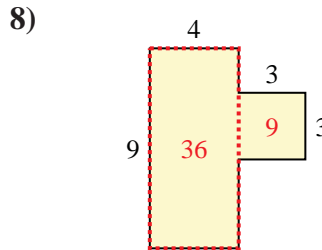
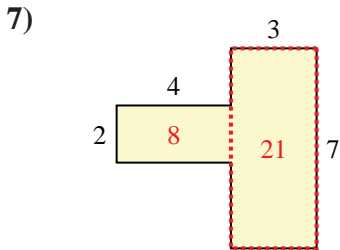
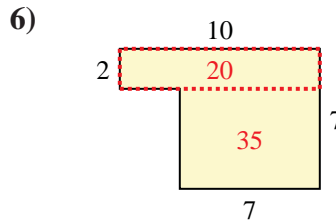
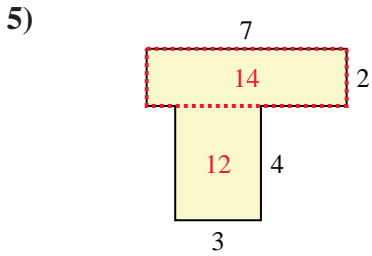
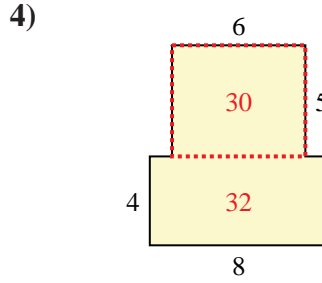
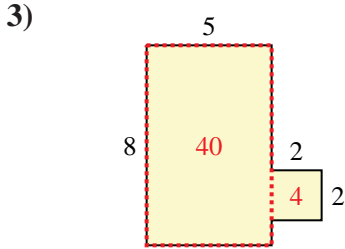
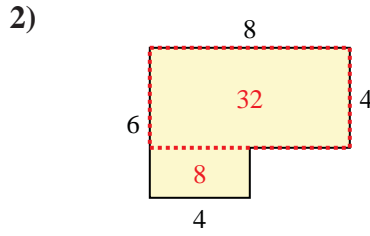
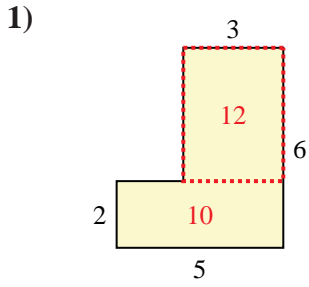


10)





Find the total area of each shape. Measurement is in millimeters (mm). Not to scale.



Answers

1. 22 mm²

2. 40 mm²

3. 44 mm²

4. 62 mm²

5. 26 mm²

6. 55 mm²

7. 29 mm²

8. 45 mm²

9. 60 mm²

10. 52 mm²