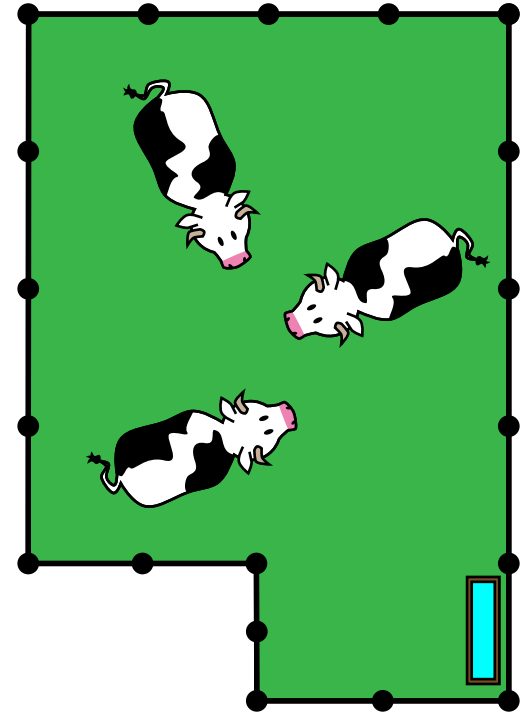

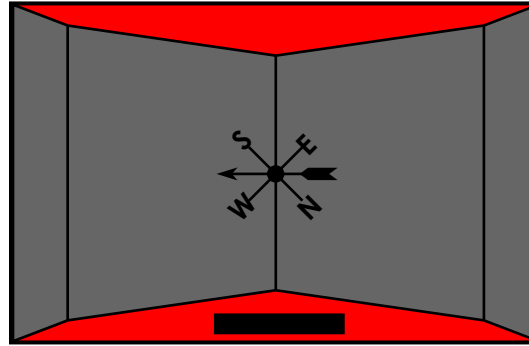



Name: _____

Farm Area

Use a ruler to answer the questions below.



1. Measure the lengths of the sides of the corn field in centimeters. Label the lengths on the picture above.

What is the area of the corn field? _____

2. Measure the lengths of the sides of the pigs' pen in centimeters. Label the lengths on the picture above.

What is the area of the pigs' pen? _____

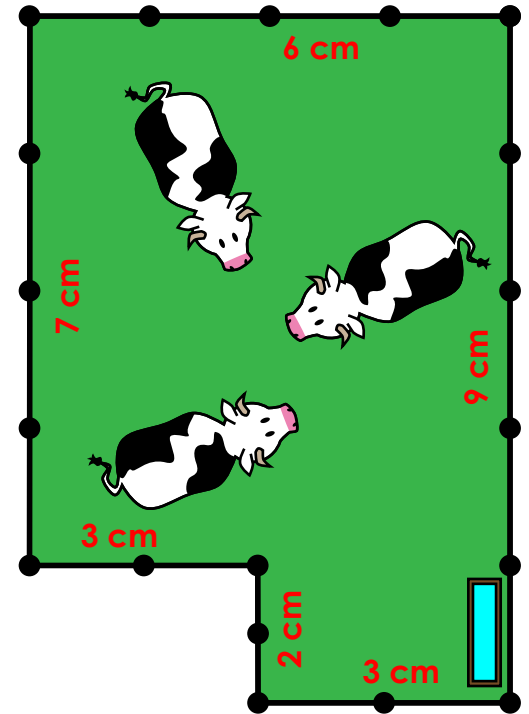
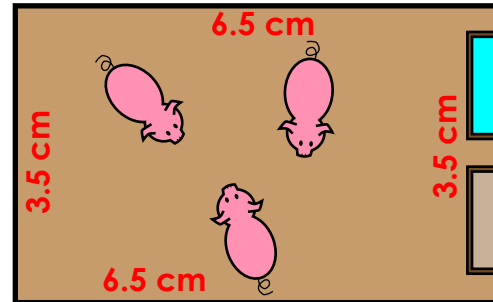
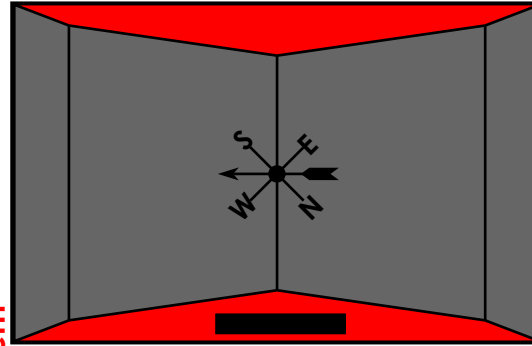

3. Measure the lengths of the sides of the cows' field in centimeters. Label the lengths on the picture above.

What is the area of the cows' field? _____

ANSWER KEY

Farm Area

Use a ruler to answer the questions below. ***NOTE: Answers will vary based on print size. Please verify the actual lengths.**



1. Measure the lengths of the sides of the corn field in centimeters. Label the lengths on the picture above.

What is the area of the corn field?

* 88 cm $8 \times 11 = 88$

2. Measure the lengths of the sides of the pigs' pen in centimeters. Label the lengths on the picture above.

What is the area of the pigs' pen?

* 22.75 cm $3.5 \times 6.5 = 22.75$

3. Measure the lengths of the sides of the cows' field in centimeters. Label the lengths on the picture above.

What is the area of the cows' field?

* 48 cm $6 \times 7 = 42$ & $2 \times 3 = 6$ $42 + 6 = 48$