





Name: _____

Pet Store Tally

Jose's pet store sells mice, birds, frogs, and fish.
The tally chart shows how many of each kind were sold.
Use the information from the tally chart to answer the questions.





Pet	Tally Marks
 Mice	
 Bird	
 Frog	
 Fish	

1. How many birds were sold? _____
2. Which pet sold the most? _____
3. How many pet sold in all? _____
4. How many more fish were sold than frogs? _____
5. Which type of pet sold 12 times? _____

ANSWER KEY

Pet Store Tally

Jose's pet store sells mice, birds, frogs, and fish.
The tally chart shows how many of each kind were sold.
Use the information from the tally chart to answer the questions.

Pet	Tally Marks
 Mice	
 Bird	
 Frog	
 Fish	

1. How many birds were sold?

8

2. Which pet sold the most?

Fish

3. How many pet sold in all?

56

4. How many more fish were sold than frogs?

6

5. Which type of pet sold 12 times?

Mice