





























Name: _____

The Pumpkin Carving Contest

Monica, Wayne, Kiersten, and Derrick were in a pumpkin carving contest. There was a prize for the person who carved the most pumpkins.

Number of Pumpkins Carved

Monica	     
Wayne	       
Kiersten	    
Derrick	        

 = 4 pumpkins

1. How many pumpkins did Monica carve? 1. _____
2. How many pumpkins did Wayne carve? 2. _____
3. How many pumpkins did Kiersten carve? 3. _____
4. How many pumpkins did Derrick carve? 4. _____
5. How many more pumpkins did Derrick carve than Kiersten? 5. _____
6. How many pumpkins did Monica and Wayne carve in all? 6. _____
7. Which person carved the greatest number of pumpkins? 7. _____
8. Which person carved the least number of pumpkins? 8. _____
9. If Kiersten carved 4 more pumpkins, how many pumpkins would she have carved in all? 9. _____
10. If Monica had carved 6 fewer pumpkins, how many would she have carved? 10. _____
11. How many more pumpkins did Wayne carve than Monica? 11. _____
12. How many pumpkins did the 4 contestants carve altogether? 12. _____