





Name: \_\_\_\_\_

# Reading Line Plots





1. How many students completed all of the assignments? \_\_\_\_\_
2. How many students did not complete any homework assignments? \_\_\_\_\_
3. How many students missed only one assignment? \_\_\_\_\_
4. How many students missed one or more assignments? \_\_\_\_\_





5. How many 6-year-olds are in the aerobics class? \_\_\_\_\_
6. How many more 8-year-olds than 7-year-olds are in the class? \_\_\_\_\_
7. Last Monday, five kids did not come to class. Which fact might possibly be true?
  - a. All of the students in the class on Monday were 8 years old.
  - b. There were no 7-year-olds in the class on Monday.
  - c. On Monday, all of the students in class were less than 8 years old.

# ANSWER KEY

## Reading Line Plots



1. How many students completed all of the assignments? 7
2. How many students did not complete any homework assignments? 2
3. How many students missed only one assignment? 1
4. How many students missed one or more assignments? 5



5. How many 6-year-olds are in the aerobics class? 0
6. How many more 8-year-olds than 7-year-olds are in the class? 4 more
7. Last Monday, five kids did not come to class. Which fact might possibly be true?
  - a. All of the students in the class on Monday were 8 years old.
  - b. There were no 7-year-olds in the class on Monday.**
  - c. On Monday, all of the students in class were less than 8 years old.