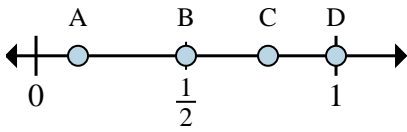
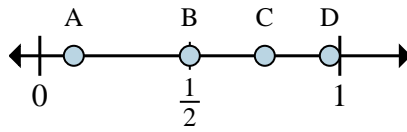




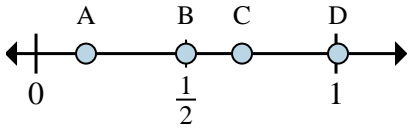
Determine which letter best shows the location of the fraction.



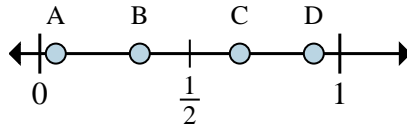
- 1) Which letter best shows $\frac{2}{2}$?
- 2) Which letter best shows $\frac{1}{2}$?



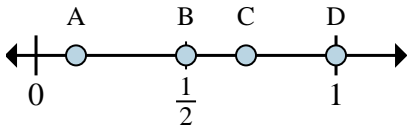
- 3) Which letter best shows $\frac{3}{4}$?
- 4) Which letter best shows $\frac{2}{4}$?



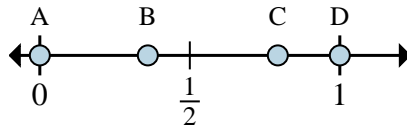
- 5) Which letter best shows $\frac{3}{6}$?
- 6) Which letter best shows $\frac{1}{6}$?



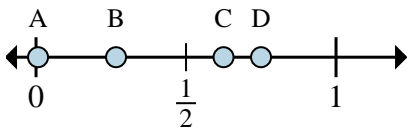
- 7) Which letter best shows $\frac{2}{3}$?
- 8) Which letter best shows $\frac{1}{3}$?



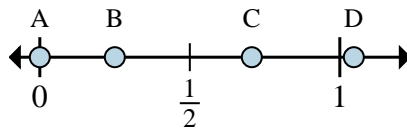
- 9) Which letter best shows $\frac{4}{8}$?
- 10) Which letter best shows $\frac{8}{8}$?



- 11) Which letter best shows $\frac{0}{3}$?
- 12) Which letter best shows $\frac{3}{3}$?



- 13) Which letter best shows $\frac{6}{8}$?
- 14) Which letter best shows $\frac{5}{8}$?



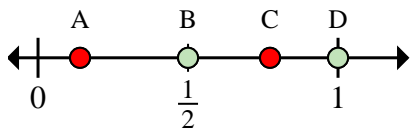
- 15) Which letter best shows $\frac{0}{8}$?
- 16) Which letter best shows $\frac{2}{8}$?

Answers

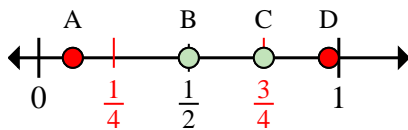
1. _____
2. _____
3. _____
4. _____
5. _____
6. _____
7. _____
8. _____
9. _____
10. _____
11. _____
12. _____
13. _____
14. _____
15. _____
16. _____



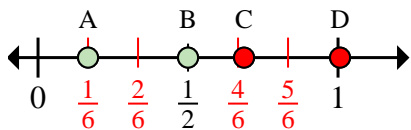
Determine which letter best shows the location of the fraction.



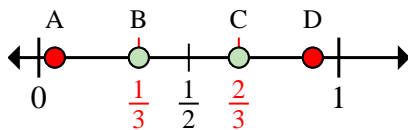
- 1) Which letter best shows $\frac{2}{2}$?
- 2) Which letter best shows $\frac{1}{2}$?



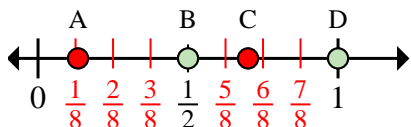
- 3) Which letter best shows $\frac{3}{4}$?
- 4) Which letter best shows $\frac{2}{4}$?



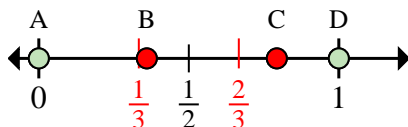
- 5) Which letter best shows $\frac{3}{6}$?
- 6) Which letter best shows $\frac{1}{6}$?



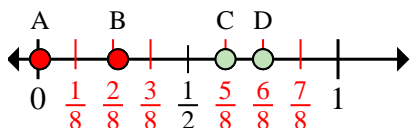
- 7) Which letter best shows $\frac{2}{3}$?
- 8) Which letter best shows $\frac{1}{3}$?



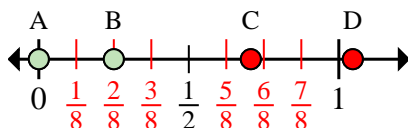
- 9) Which letter best shows $\frac{4}{8}$?
- 10) Which letter best shows $\frac{8}{8}$?



- 11) Which letter best shows $\frac{0}{3}$?
- 12) Which letter best shows $\frac{3}{3}$?



- 13) Which letter best shows $\frac{6}{8}$?
- 14) Which letter best shows $\frac{5}{8}$?



- 15) Which letter best shows $\frac{0}{8}$?
- 16) Which letter best shows $\frac{2}{8}$?

Answers

- 1. **D**
- 2. **B**
- 3. **C**
- 4. **B**
- 5. **B**
- 6. **A**
- 7. **C**
- 8. **B**
- 9. **B**
- 10. **D**
- 11. **A**
- 12. **D**
- 13. **D**
- 14. **C**
- 15. **A**
- 16. **B**