
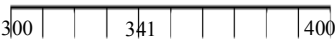


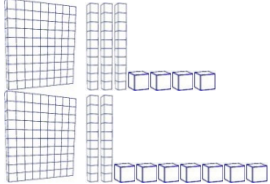


Name:

Weekly Homework Sheet Q1:2

Date:

Monday	Tuesday	Wednesday	Thursday
What is the value of the underlined digit? $7\underline{3}5$	What is the value of the underlined digit? $8\underline{2}4$	What is the value of the underlined digit? $82\underline{4}$	What is the value of the underlined digit? $8\underline{2}4$
Write the number in expanded form. 742	Write the number in expanded form. 690	Write the number in expanded form. 403	Write the number in expanded form. 579
Order the numbers from GREATEST to LEAST. 834 298 348	Circle all the ODD numbers. 7 14 54 33 90 45	Order the numbers from LEAST to GREATEST. 473 481 437	Circle all the EVEN numbers. 9 16 72 55 70 25
Write 5 equations where the difference is equal to 3. 1. 2. 3. 4. 5.	Find the sum. $8+1=$ $7+5=$ $9+8=$ $4+6=$ $2+9=$ $7+4=$ $6+7=$ $9+6=$	Write 5 equations where the sum is equal to 20. 1. 2. 3. 4. 5.	Find the difference. $8 - 7 =$ $6 - 4 =$ $9 - 3 =$ $13 - 7 =$ $16 - 5 =$ $18 - 9 =$ $12 - 8 =$ $11 - 6 =$
Round each number to the nearest 10. 87 _____ 43 _____ 755 _____ 897 _____ 304 _____	Round each number to the nearest 10. 97 _____ 44 _____ 755 _____ 273 _____ 495 _____	Round each number to the nearest 10. 997 _____ 485 _____ 614 _____ 321 _____ 572 _____	Round each number to the nearest 10. 54 _____ 95 _____ 7 _____ 236 _____ 465 _____
Is 167 closer to 100 or 200?  Is 341 closer to 300 or 400? 	Round 439 to the nearest hundred.  Round 681 to the nearest hundred. 	Round each number to the nearest 100. 672 _____ 250 _____ 378 _____ 129 _____ 67 _____	Round each number to the nearest 100. 443 _____ 956 _____ 349 _____ 258 _____ 609 _____
Find the sum. 	Solve with a proof picture $\begin{array}{r} 357 \\ + 164 \\ \hline \end{array}$	Use all totals to solve $\begin{array}{r} 502 \\ + 836 \\ \hline \end{array}$	Use all totals to solve $235 + 123$
Use all totals to solve $435 + 123$	Solve with a proof picture $\begin{array}{r} 427 \\ + 243 \\ \hline \end{array}$	Solve with a proof picture $\begin{array}{r} 607 \\ + 324 \\ \hline \end{array}$	Solve with a proof picture $245 + 137$.


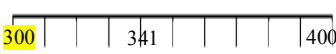
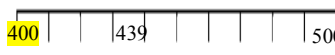
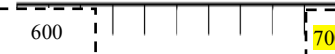
My Work

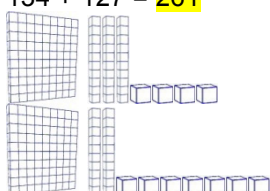
Monday	Tuesday
Wednesday	Thursday

My Progress

MONDAY	TUESDAY	WEDNESDAY	THURSDAY
# of questions _____	# of questions _____	# of questions _____	# of questions _____
# correct _____	# correct _____	# correct _____	# correct _____
I need more help with...	I need more help with...	I need more help with...	I need more help with...
_____	_____	_____	_____
_____	_____	_____	_____
_____	_____	_____	_____
_____	_____	_____	_____
_____	_____	_____	_____

Answer Key - Weekly Homework Sheet Q1:2

Monday	Tuesday	Wednesday	Thursday
What is the value of the underlined digit? 3 <u>0</u>	What is the value of the underlined digit? 2 <u>0</u>	What is the place value of the underlined digit? <u>4</u>	What is the place value of the underlined digit? <u>800</u>
Write the number in expanded form. 7 <u>4</u> 2 700+40+2	Write the number in expanded form. 6 <u>9</u> 0 600+90	Write the number in expanded form. 4 <u>0</u> 3 400+3	Write the number in expanded form. 5 <u>7</u> 9 500+70+9
Order the numbers from GREATEST to LEAST. 834 298 348 834 - 348 - 298	Circle all the ODD numbers. 7 14 54 33 90 45 33, 45	Order the numbers from LEAST to GREATEST. 473 481 437 437, 473, 481	Circle all the EVEN numbers. 9 16 72 55 70 25 16, 72, 70
Write 5 equations where the difference is equal to 3. 1. 6 - 3 = 3 2. 7 - 4 = 3 3. 8 - 5 = 3 4. 9 - 6 = 3 5. 10 - 7 = 3	Find the sum. 8+1=9 7+5=12 9+8=17 4+6=10 2+9=11 7+4=11 6+7=13 9+6=15	Write 5 equations where the sum is equal to 20. 1. 10 + 10 = 20 2. 9 + 11 = 20 3. 8 + 12 = 20 4. 7 + 13 = 20 5. 6 + 14 = 20	Find the difference. 8 - 7 = 1 6 - 4 = 2 9 - 3 = 6 13 - 7 = 6 16 - 5 = 11 18 - 9 = 9 12 - 8 = 4 11 - 6 = 5
Round each number to the nearest 10. 87 <u>90</u> 43 <u>40</u> 755 <u>760</u> 897 <u>900</u> 304 <u>300</u>	Round each number to the nearest 10. 97 <u>100</u> 44 <u>40</u> 755 <u>760</u> 273 <u>270</u> 495 <u>500</u>	Round each number to the nearest 10. 997 <u>1,000</u> 485 <u>490</u> 614 <u>610</u> 321 <u>320</u> 572 <u>570</u>	Round each number to the nearest 10. 54 <u>50</u> 95 <u>100</u> 7 <u>10</u> 236 <u>240</u> 465 <u>470</u>
Is 167 closer to 100 or 200?  Is 341 closer to 300 or 400? 	Round 439 to the nearest hundred.  Round 681 to the nearest hundred. 	Round each number to the nearest 100. 672 <u>700</u> 250 <u>300</u> 378 <u>400</u> 129 <u>100</u> 67 <u>100</u>	Round each number to the nearest 100. 443 <u>400</u> 956 <u>1,000</u> 349 <u>300</u> 258 <u>300</u> 609 <u>600</u>

<p>Find the sum. $134 + 127 = 261$</p> 	$\begin{array}{r} 357 \\ + 164 \\ \hline 521 \end{array}$	$\begin{array}{r} 500 + 00 + 2 \\ 800 + 30 + 6 \\ \hline 1300 + 30 + 8 \end{array}$ <p>1338</p>	$\begin{array}{r} 200 + 30 + 5 \\ 100 + 20 + 3 \\ \hline 300 + 50 + 8 \end{array}$ <p>358</p>
$\begin{array}{r} 400 + 30 + 5 \\ 100 + 20 + 3 \\ \hline 500 + 50 + 8 \end{array}$ <p>558</p>	$\begin{array}{r} 427 \\ + 243 \\ \hline 670 \end{array}$	$\begin{array}{r} 607 \\ + 324 \\ \hline 931 \end{array}$	$245 + 137 = 382$