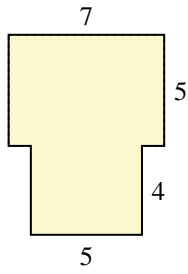




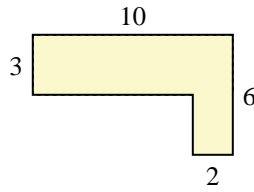
Find the total area of each shape. Measurement is in millimeters (mm). Not to scale.

Answers

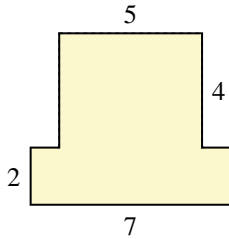
1)



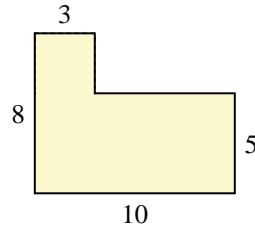
2)



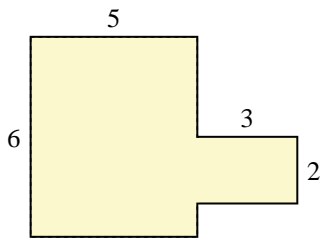
3)



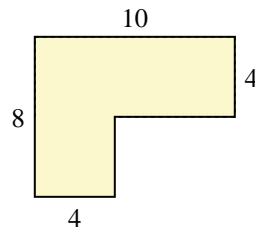
4)



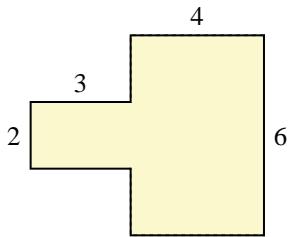
5)



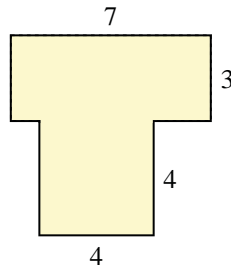
6)



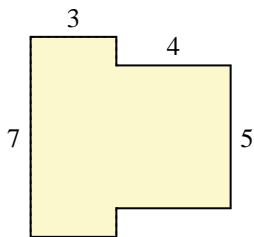
7)



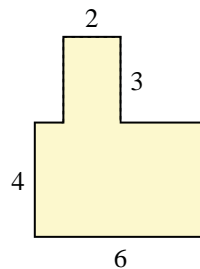
8)



9)



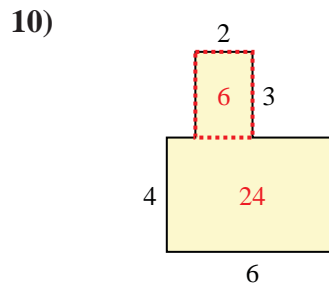
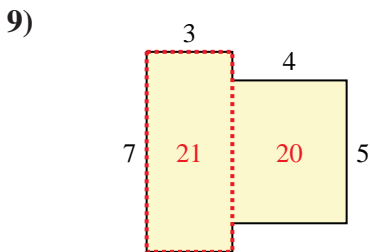
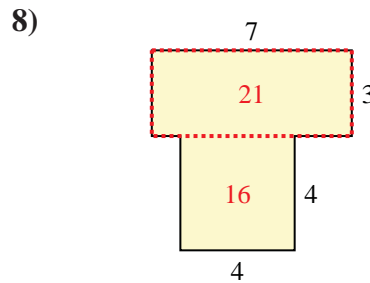
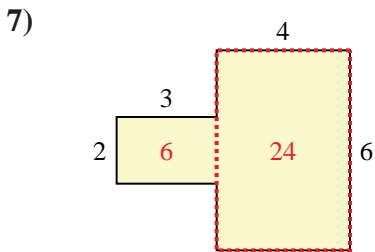
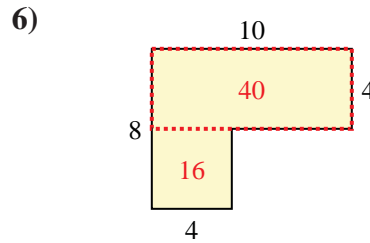
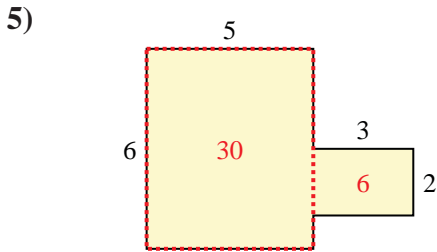
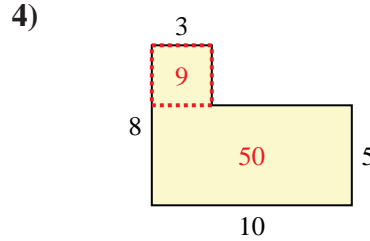
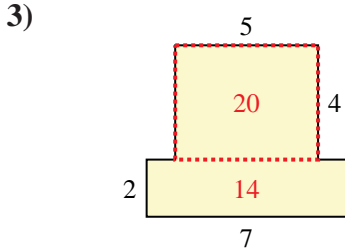
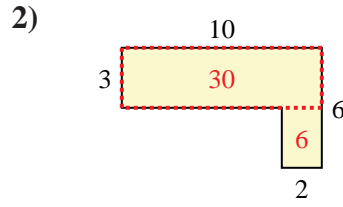
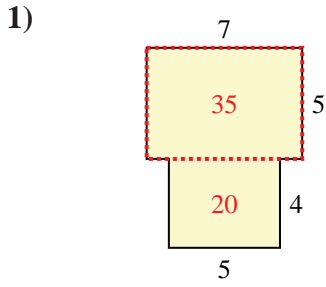
10)



- 1. _____
- 2. _____
- 3. _____
- 4. _____
- 5. _____
- 6. _____
- 7. _____
- 8. _____
- 9. _____
- 10. _____



Find the total area of each shape. Measurement is in millimeters (mm). Not to scale.



Answers

1. 55 mm²

2. 36 mm²

3. 34 mm²

4. 59 mm²

5. 36 mm²

6. 56 mm²

7. 30 mm²

8. 37 mm²

9. 41 mm²

10. 30 mm²