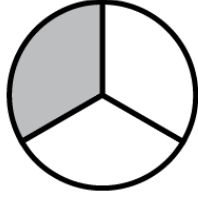
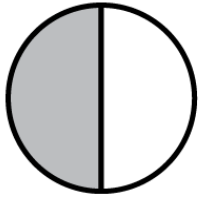
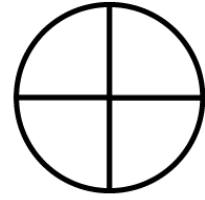



Comparing Fractions

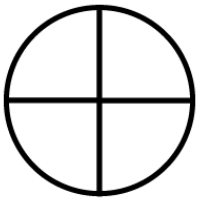
Shade and use $>$, $<$, or $=$ to compare the fractions.




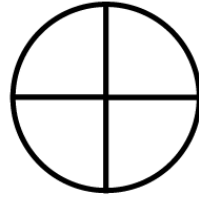
$$\frac{1}{2} > \frac{1}{3}$$



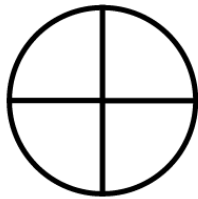

$$\frac{2}{4} \square \frac{3}{4}$$



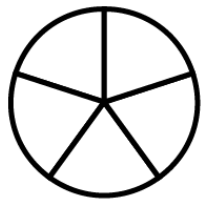
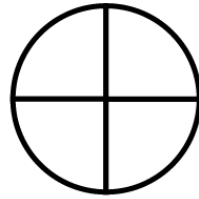
$$\frac{2}{4} \square \frac{2}{3}$$



$$\frac{2}{4} \square \frac{4}{8}$$



$$\frac{1}{2} \square \frac{2}{4}$$



$$\frac{3}{4} \square \frac{4}{5}$$