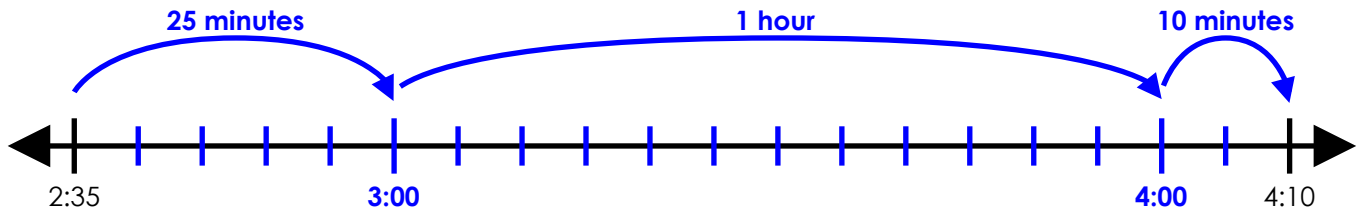


Name: _____

Elapsed Time Number Line

Start Time	End Time
2:35 pm	4:10 pm



elapsed time: 1 hour and 35 minutes

Use an elapsed time number line to calculate the amount of time that has passed.

a.

Start Time	End Time
11:55 am	1:20 pm



elapsed time: _____

b.

Start Time	End Time
6:15 pm	9:10 pm



elapsed time: _____

c.

Start Time	End Time
7:40 am	10:05 am



elapsed time: _____

d.

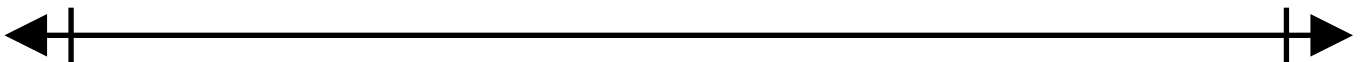
Start Time	End Time
10:30 pm	12:15 am



elapsed time: _____

e.

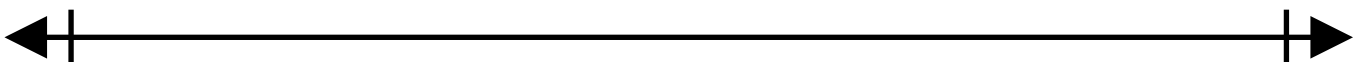
Start Time	End Time
2:20 pm	3:05 pm



elapsed time: _____



Start Time	End Time
quarter after 5 pm	10 minutes to 9 pm

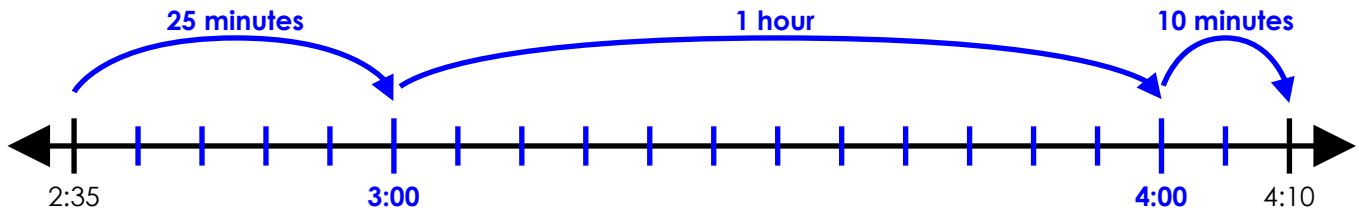


elapsed time: _____

ANSWER KEY

Elapsed Time Number Line

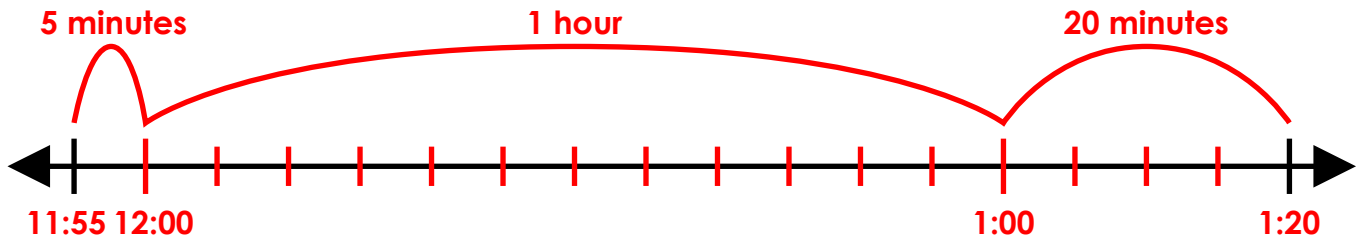
Start Time	End Time
2:35 pm	4:10 pm



elapsed time: 1 hour and 35 minutes

a.

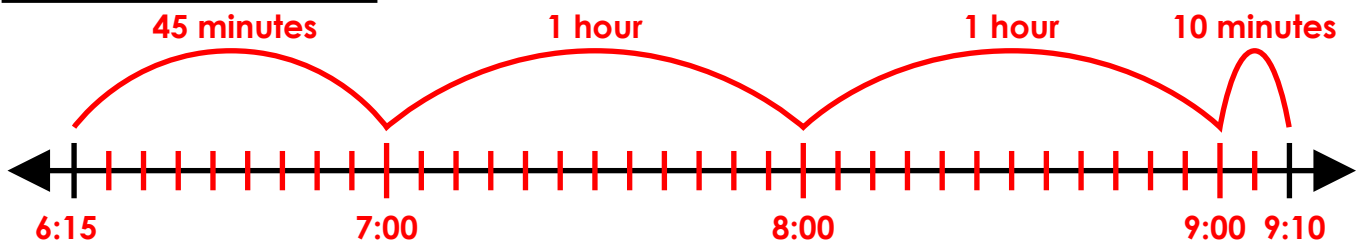
Start Time	End Time
11:55 am	1:20 pm



elapsed time: 1 hour and 25 minutes

b.

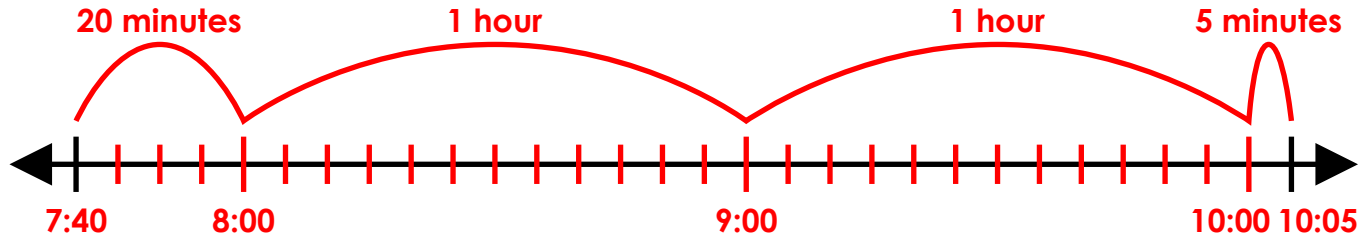
Start Time	End Time
6:15 pm	9:10 pm



elapsed time: 2 hours and 55 minutes

c.

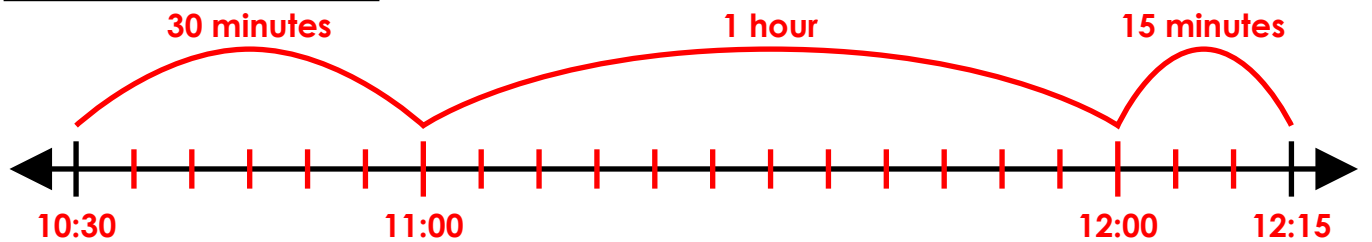
Start Time	End Time
7:40 am	10:05 am



elapsed time: 2 hours and 25 minutes

d.

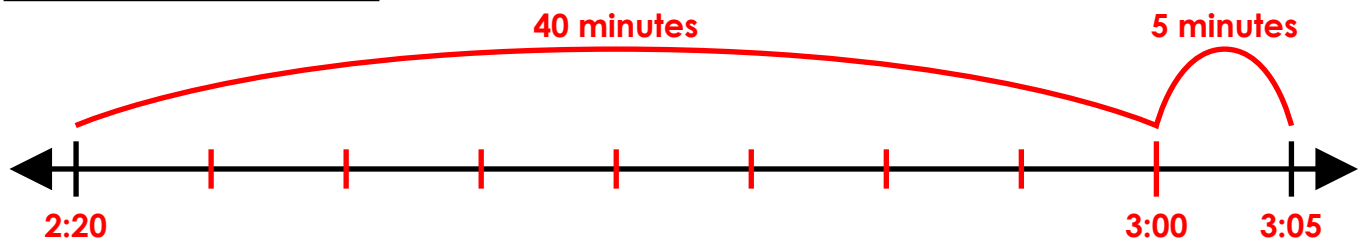
Start Time	End Time
10:30 pm	12:15 am



elapsed time: 1 hour and 45 minutes

e.

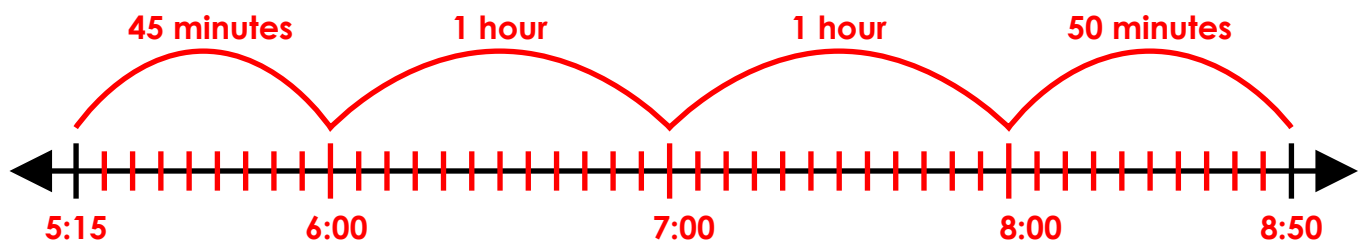
Start Time	End Time
2:20 pm	3:05 pm



elapsed time: 45 minutes



Start Time	End Time
quarter after 5 pm	10 minutes to 9 pm



elapsed time: 3 hours and 35 minutes